

Name \_\_\_\_\_


Date \_\_\_\_\_



## WHO CHOSE WHICH SHAPE? #2

Each of the Salamanders chose a different shape from the table below.

Can you use the clues to work out who chose which shape?




Captain




Frazer



Tyger



Sally

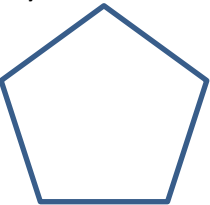
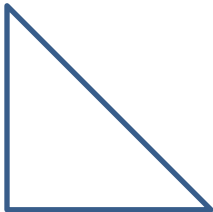


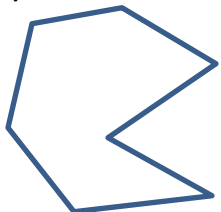


Flame

### CLUES

- Captain's shape has 4 sides.
- Frazer's shape has just one line of symmetry.
- Tyger's shape has more than 4 sides.
- Sally's shape has sides all the same length.
- Flame's shape has more than one right angle.

Here are the shapes they chose.

|   |   |   |   |   |
|---|---|---|---|---|
| A)<br> | B)<br> | C)<br> | D)<br> | E)<br> |
|   |   |   |   |   |

Write the name of the salamander under their shape.

Name \_\_\_\_\_

Date \_\_\_\_\_



## WHO CHOSE WHICH SHAPE? #2 ANSWERS

Each of the Salamanders chose a different shape from the table below.

Can you use the clues to work out who chose which shape?




Captain




Frazer



Tyger



Sally

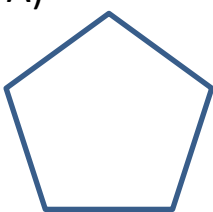



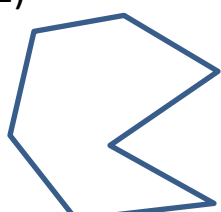


Flame

### CLUES

- Captain's shape has 4 sides.
- Frazer's shape has just one line of symmetry.
- Tyger's shape has more than 4 sides.
- Sally's shape has sides all the same length.
- Flame's shape has more than one right angle.

Here are the shapes they chose.

|   |   |   |   |   |
|---|---|---|---|---|
| A)<br> | B)<br> | C)<br> | D)<br> | E)<br> |
| Sally   | Frazer  | Captain   | Flame   | Tyger   |

Write the name of the salamander under their shape.