

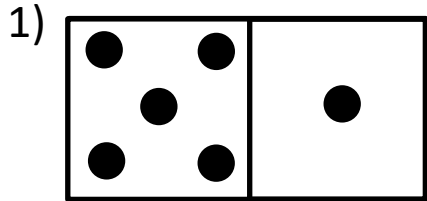
Name \_\_\_\_\_

Date \_\_\_\_\_

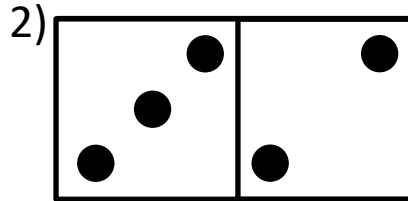


# DOMINO ADDITION SHEET 4

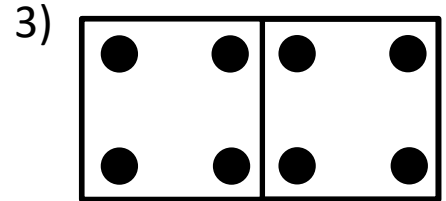
Count the number of dots on each domino and fill in the total.



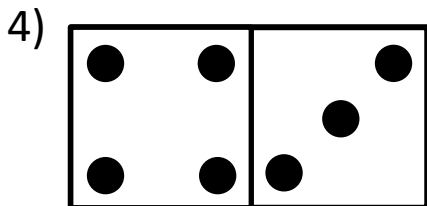
\_\_\_ + \_\_\_ = \_\_\_



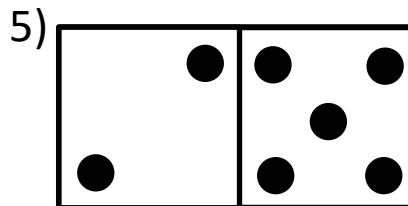
\_\_\_ + \_\_\_ = \_\_\_



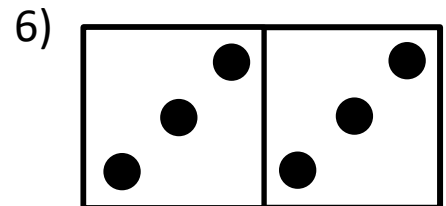
\_\_\_ + \_\_\_ = \_\_\_



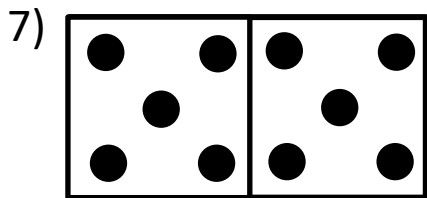
\_\_\_ + \_\_\_ = \_\_\_




\_\_\_ + \_\_\_ = \_\_\_



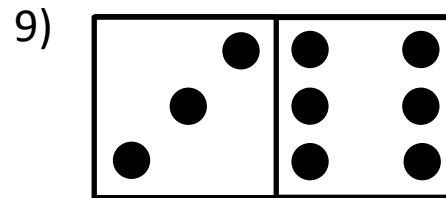
\_\_\_ + \_\_\_ = \_\_\_




\_\_\_ + \_\_\_ = \_\_\_




\_\_\_ + \_\_\_ = \_\_\_



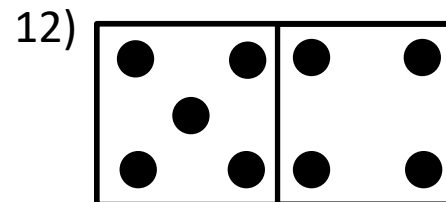
\_\_\_ + \_\_\_ = \_\_\_



\_\_\_ + \_\_\_ = \_\_\_



\_\_\_ + \_\_\_ = \_\_\_



\_\_\_ + \_\_\_ = \_\_\_

Shade the dominoes which have a total of 10.

