


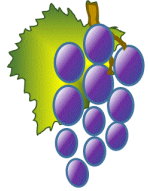






Name

Date



AT THE SHOPS 1

			
Orange 7¢	Banana 5¢	Pear 8¢	Grapes 2¢
			
Apple 3¢	Plum 4¢	Peach 9¢	Juice 10¢

Tyger buys 2 items from the shop. It costs him 12¢.

Which items could he have bought? One has been found for you.

1)	Orange	Banana
2)		
3)		
4)		

There are 3 more possibilities.

Can you find them?

Sally buys three different items from the shop. It costs her 15¢. Which items could she have bought? There are 5 possibilities.




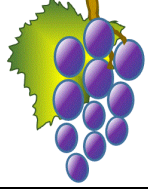




1)			
2)			
3)			
4)			
5)			

Name

Date



AT THE SHOPS 1 ANSWERS

			
Orange 7¢	Banana 5¢	Pear 8¢	Grapes 2¢
			
Apple 3¢	Plum 4¢	Peach 9¢	Juice 10¢

Tyger buys 2 items from the shop. It costs him 12¢.

Which items could he have bought? One has been found for you.

1)	Orange	Banana
2)	Pear	Plum
3)	Grapes	Juice
4)	Peach	Apple

There are 3 more possibilities.

Can you find them?

Sally buys three different items from the shop. It costs her 15¢. Which items could she have bought?

1)	Orange	Banana	Apple
2)	Pear	Banana	Grapes
3)	Pear	Plum	Apple
4)	Peach	Plum	Grapes
5)	Juice	Apple	Grapes