


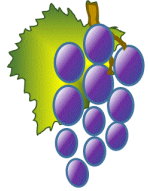






Name

Date



AT THE SHOPS 1UK

			
Orange 7p	Banana 5p	Pear 8p	Grapes 2p
			
Apple 3p	Plum 4p	Peach 9p	Juice 10p

Tyger buys 2 items from the shop. It costs him 12p.

Which items could he have bought? One has been found for you.

1)	Orange	Banana
2)		
3)		
4)		

There are 3 more possibilities.

Can you find them?

Sally buys three different items from the shop. It costs her 15p. Which items could she have bought? There are 5 possibilities.




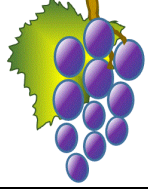




1)			
2)			
3)			
4)			
5)			

Name

Date



AT THE SHOPS 1UK ANSWERS

			
Orange 7p	Banana 5p	Pear 8p	Grapes 2p
			
Apple 3p	Plum 4p	Peach 9p	Juice 10p

Tyger buys 2 items from the shop. It costs him 12p.

Which items could he have bought? One has been found for you.

1)	Orange	Banana
2)	Pear	Plum
3)	Grapes	Juice
4)	Peach	Apple

There are 3 more possibilities.

Can you find them?

Sally buys three different items from the shop. It costs her 15p. Which items could she have bought?

1)	Orange	Banana	Apple
2)	Pear	Banana	Grapes
3)	Pear	Plum	Apple
4)	Peach	Plum	Grapes
5)	Juice	Apple	Grapes