

Name


Date



WHO CHOSE WHICH SHAPE? #1

Each of the Salamanders chose a different shape from the table below.

Can you use the clues to work out who chose which shape?



Captain



Frazer



Tyger




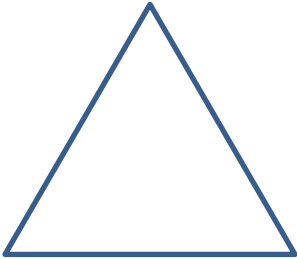


Sally

CLUES

- Captain's shape had sides that were not all the same size.
- Frazer's shape had 4 sides.
- Tyger's shape was not a square.
- Sally chose a curved shape.

Here are the shapes they chose.

A) 	B) 	C) 	D) 

Write the name of the salamander under their shape.

Name


Date



WHO CHOSE WHICH SHAPE? #1 ANSWERS

Each of the Salamanders chose a different shape from the table below.

Can you use the clues to work out who chose which shape?




Captain



Frazer



Tyger




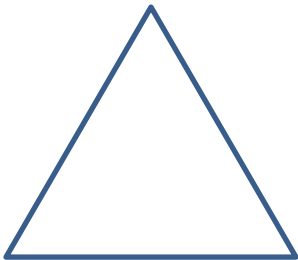


Sally

CLUES

- Captain's shape had sides that were not all the same size.
- Frazer's shape had 4 sides.
- Tyger's shape was not a square.
- Sally chose a curved shape.

Here are the shapes they chose.

A) 	B) 	C) 	D) 
Sally	Frazer	Captain	Tyger