

Name _____

Date _____


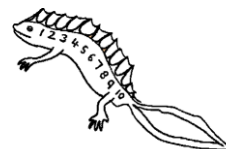


COUNTING TO 5 SHEET 3

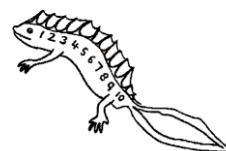
Help Newton to count the creatures.



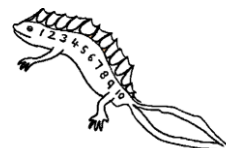
How many snakes? _____



How many fish? _____



How many frogs? _____



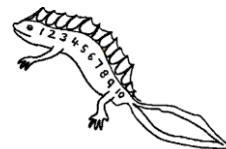
Name

Date

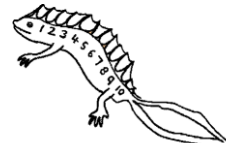


COUNTING TO 5 SHEET 3 ANSWERS

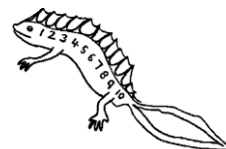
Help Newton to count the creatures.



How many snakes? 2



How many fish? 4



How many frogs? 3