


Name _____




















Date _____



SCALED PICTURE GRAPHS 3A - BUG HUNT

Salamander Class went on a bug hunt looking for bugs in different habitats.

Each  represents 5 bugs.

Long grass								
Short grass								
Under logs								
Pond								
On leafy plants								

- 30 bugs were found in under logs. Show this in the picture graph.
- What was the most common place to find bugs? _____
How many bugs were found there? _____
- What was the least common place to find bugs? _____
How many bugs were found there? _____
- How many more bugs were found in the long grass than the short grass?

- Double the number of bugs were found in the pond than on leafy plants.
True or false? _____
- How many bugs were found in total that day? _____


Name


























Date



SCALED PICTURE GRAPHS 3A - BUG HUNT ANSWERS

Salamander Class went on a bug hunt looking for bugs in different habitats.

Each  represents 5 bugs.

Long grass								
Short grass								
Under logs								
Pond								
On leafy plants								

- 30 bugs were found in under logs. Show this in the picture graph.
- What was the most common place to find bugs? In the pond
How many bugs were found there? 40
- What was the least common place to find bugs? In the short grass
How many bugs were found there? 10
- How many more bugs were found in the long grass than the short grass? 15
- Double the number of bugs were found in the pond than on leafy plants.
True or false? True
- How many bugs were found in total that day? 125