





DIVISION PROBLEMS 3.2

Work out the answers to these division problems involving sharing and grouping.


1) Share out 20 pencils equally between 5 pencil pots.
How many pencils in each pot?




2) Divide 24 children into teams of 4.
How many teams will there be?



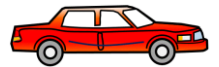
3) Divide 30 calculators into packs of 10.
How many packs will there be?



4) Share out 27 fish equally between 3 aquariums.
How many fish in each aquarium?



5) Share out 21 passengers equally between 7 cars.
How many passengers in each car?



6) Divide 36 competitors equally between 9 events.
How many competitors for each event?






DIVISION PROBLEMS 3.2 ANSWERS

Work out the answers to these division problems involving sharing and grouping.


1) Share out 20 pencils equally between 5 pencil pots.
How many pencils in each pot?

$20 \div 5 = 4$. There are 4 pencils in each pot.




2) Divide 24 children into teams of 4.
How many teams will there be?

$24 \div 4 = 6$. There will be 6 teams.




3) Divide 30 calculators into packs of 10.
How many packs will there be?

$30 \div 10 = 3$. There will be 3 packs.



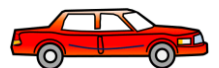
4) Share out 27 fish equally between 3 aquariums.
How many fish in each aquarium?

$27 \div 3 = 9$. There will be 9 fish in each aquarium.



5) Share out 21 passengers equally between 7 cars.
How many passengers in each car?

$21 \div 7 = 3$. Each car will take 3 passengers.



6) Divide 36 competitors equally between 9 events.
How many competitors for each event?

$36 \div 9 = 4$. Each event will have 4 competitors.

