







Name

Date



DIVISION PROBLEMS 4.1A


Work out the answers to these division problems involving sharing and grouping.

1) Divide 65 children into teams of 5. How many teams?		
2) Share out 52 playing cards between 4 people. How many cards will each person get?		
3) Divide 42 eggs into boxes of 6 eggs. How many boxes can I fill?		
4) Share 64 chocolates between 4 children. How many chocolates each?		
5) Divide 72 pencils into packs of 8. How many packets will I make?		
6) Share out 42 bones between 3 dogs. How many bones will each dog get?		



DIVISION PROBLEMS 4.1A ANSWERS

Work out the answers to these division problems involving sharing and grouping.

1) Divide 65 children into teams of 5. How many teams?	<u>$65 \div 5 = 13.$</u> <u>There would be 13 teams.</u>	
2) Share out 52 playing cards between 4 people. How many cards will each person get?	<u>$52 \div 4 = 13.$</u> <u>There would be 13 cards each.</u>	
3) Divide 42 eggs into boxes of 6 eggs. How many boxes can I fill?	<u>$42 \div 6 = 7.$</u> <u>You can fill 7 boxes.</u>	
4) Share 64 chocolates between 4 children. How many chocolates each?	<u>$64 \div 4 = 16.$</u> <u>Each child would get 16 chocolates.</u>	
5) Divide 72 pencils into packs of 8. How many packets will I make?	<u>$72 \div 8 = 9.$</u> <u>You would make 9 packets.</u>	
6) Share out 42 bones between 3 dogs. How many bones will each dog get?	<u>$42 \div 3 = 14.$</u> <u>Each dog would get 14 bones.</u>	