







Name

Date



## DIVISION PROBLEMS 4.1B






Work out the answers to these division problems involving sharing and grouping.

1) Divide 135 children into teams of 5. How many teams?		
2) Share out 104 playing cards between 4 people. How many cards will each person get?		
3) Divide 144 eggs into boxes of 6 eggs. How many boxes can I fill?		
4) Share 124 chocolates between 4 children. How many chocolates each?		
5) Divide 176 pencils into packs of 8. How many packets will I make?		
6) Share out 123 bones between 3 dogs. How many bones will each dog get?		



## DIVISION PROBLEMS 4.1B ANSWERS

Work out the answers to these division problems involving sharing and grouping.

1) Divide 135 children into teams of 5. How many teams?	<u><math>135 \div 5 = 27.</math></u> <u>There would be 27 teams.</u>	
2) Share out 104 playing cards between 4 people. How many cards will each person get?	<u><math>104 \div 4 = 26.</math></u> <u>There would be 26 cards each.</u>	
3) Divide 144 eggs into boxes of 6 eggs. How many boxes can I fill?	<u><math>144 \div 6 = 24.</math></u> <u>You can fill 24 boxes.</u>	
4) Share 124 chocolates between 4 children. How many chocolates each?	<u><math>124 \div 4 = 31.</math></u> <u>Each child would get 31 chocolates.</u>	
5) Divide 176 pencils into packs of 8. How many packets will I make?	<u><math>176 \div 8 = 22.</math></u> <u>You would make 22 packets.</u>	
6) Share out 123 bones between 3 dogs. How many bones will each dog get?	<u><math>123 \div 3 = 41.</math></u> <u>Each dog would get 41 bones.</u>	