







Name

Date








## DIVISION PROBLEMS 4.1C

Work out the answers to these division problems involving sharing and grouping.

1) Divide 133 children into teams of 7. How many teams?		
2) Share out 104 playing cards between 8 people. How many cards will each person get?		
3) Divide 192 eggs into boxes of 6 eggs. How many boxes can I fill?		
4) Share 162 chocolates between 9 children. How many chocolates each?		
5) Divide 272 pencils into packs of 8. How many packets will I make?		
6) Share out 259 bones between 7 dogs. How many bones will each dog get?		



# DIVISION PROBLEMS 4.1C ANSWERS

1) Divide 133 children into teams of 7. How many teams?	<u><math>133 \div 7 = 19.</math></u> <u>There would be 19 teams.</u>	
2) Share out 104 playing cards between 8 people. How many cards will each person get?	<u><math>104 \div 8 = 13.</math></u> <u>There would be 13 cards each.</u>	
3) Divide 192 eggs into boxes of 6 eggs. How many boxes can I fill?	<u><math>192 \div 6 = 32.</math></u> <u>You can fill 32 boxes.</u>	
4) Share 162 chocolates between 9 children. How many chocolates each?	<u><math>162 \div 9 = 18.</math></u> <u>Each child would get 18 chocolates.</u>	
5) Divide 272 pencils into packs of 8. How many packets will I make?	<u><math>272 \div 8 = 34.</math></u> <u>You would make 34 packets.</u>	
6) Share out 259 bones between 7 dogs. How many bones will each dog get?	<u><math>259 \div 7 = 37.</math></u> <u>Each dog would get 37 bones.</u>	