







Name

Date



## DIVISION PROBLEMS 4.2A

*Work out the answers to these division problems.*

1) Divide 135 calculators into packs of 9. How many packs?		
2) Share out 92 snails between 4 salamanders. How many snails does each salamander get?		
3) How many weeks are there in 84 days?		
4) How many years is 72 months?		
5) Pens come in packs of 6. I need 78 pens. How many packs should I buy?		
6) Sally needs to buy 132 cards for her friends. They come in packs of 6. How many packs does she need to buy?		
7) How many dimes will I need to make \$4?		







Name

Date



## DIVISION PROBLEMS 4.2A ANSWERS

*Work out the answers to these division problems.*

1) Divide 135 calculators into packs of 9. How many packs?	<u><math>135 \div 9 = 15.</math></u> <u>You would need 15 packs.</u>	
2) Share out 92 snails between 4 salamanders. How many snails does each salamander get?	<u><math>92 \div 4 = 23.</math></u> <u>Each salamander gets 23 snails.</u>	
3) How many weeks are there in 84 days?	<u><math>84 \div 7 = 12.</math></u> <u>There are 12 weeks in 84 days.</u>	
4) How many years is 72 months?	<u><math>72 \div 12 = 6.</math></u> <u>There are 6 years in 72 months.</u>	
5) Pens come in packs of 6. I need 78 pens. How many packs should I buy?	<u><math>78 \div 6 = 13.</math></u> <u>You need to buy 13 packs.</u>	
6) Sally needs to buy 132 cards for her friends. They come in packs of 6. How many packs does she need to buy?	<u><math>132 \div 6 = 22.</math></u> <u>She needs to buy 22 packs.</u>	
7) How many dimes will I need to make \$4?	<u><math>400 \div 10 = 40.</math></u> <u>You would need 40 dimes.</u>	