







Name

Date









DIVISION PROBLEMS 4.2B

Work out the answers to these division problems.

| | | |
|--|--|---|
| 1) Divide 207 calculators into packs of 9. How many packs? | |  |
| 2) Share out 184 snails between 8 salamanders. How many snails does each salamander get? | |  |
| 3) How many weeks are there in 406 days? | |  |
| 4) How many years is 324 months? | | |
| 5) Pens come in packs of 8. A school needs 376 pens. How many packs should they order? | |  |
| 6) Sally needs to buy 156 cards for her friends. They come in packs of 6. How many packs does she need to buy? | |  |
| 7) How many dimes will I need to make \$5.70? | |  |



DIVISION PROBLEMS 4.2B ANSWERS

| | | |
|--|---|---|
| 1) Divide 207 calculators into packs of 9. How many packs? | <u>$207 \div 9 = 23.$</u> <u>You would have 23 packs.</u> |  |
| 2) Share out 184 snails between 8 salamanders. How many snails does each salamander get? | <u>$184 \div 8 = 23.$</u> <u>Each salamander gets 23 snails.</u> |  |
| 3) How many weeks are there in 406 days? | <u>$406 \div 7 = 58.$</u> <u>There are 58 weeks in 406 days.</u> |  |
| 4) How many years is 324 months? | <u>$324 \div 12 = 27.$</u> <u>There are 27 years in 324 months.</u> | |
| 5) Pens come in packs of 8. A school needs 376 pens. How many packs should they order? | <u>$376 \div 8 = 47.$</u> <u>The school should order 47 packs.</u> |  |
| 6) Sally needs to buy 156 cards for her friends. They come in packs of 6. How many packs does she need to buy? | <u>$156 \div 6 = 26.$</u> <u>She would need to buy 26 packs.</u> |  |
| 7) How many dimes will I need to make \$5.70? | <u>$570 \div 10 = 57.$</u> <u>You would need 57 dimes.</u> |  |