







Name

Date



DIVISION PROBLEMS 4.2C







Work out the answers to these division problems.

1) Divide 468 calculators into packs of 9. How many packs?		
2) Share out 608 snails between 8 salamanders. How many snails does each salamander get?		
3) How many weeks are there in 1246 days?		
4) How many years is 588 months?		
5) Pens come in packs of 8. A school needs 3,776 pens. How many packs should they order?		
6) Sally needs to buy 480 cards for her friends. They come in packs of 6. How many packs does she need to buy?		
7) How many nickels will I need to make \$5.70?		



DIVISION PROBLEMS 4.2C ANSWERS

Work out the answers to these division problems.

1) Divide 468 calculators into packs of 9. How many packs?	<u>$468 \div 9 = 52.$</u> <u>You would need 52 packs.</u>	
2) Share out 608 snails between 8 salamanders. How many snails does each salamander get?	<u>$608 \div 8 = 76.$</u> <u>Each salamander gets 76 snails.</u>	
3) How many weeks are there in 1246 days?	<u>$1246 \div 7 = 178.$</u> <u>There are 178 weeks in 1246 days.</u>	
4) How many years is 588 months?	<u>$588 \div 12 = 49.$</u> <u>There are 49 years in 588 months.</u>	
5) Pens come in packs of 8. A school needs 3,776 pens. How many packs should they order?	<u>$3776 \div 8 = 472.$</u> <u>The school should order 472 packs.</u>	
6) Sally needs to buy 480 cards for her friends. They come in packs of 6. How many packs does she need to buy?	<u>$480 \div 6 = 80.$</u> <u>Sally needs to buy 80 packs.</u>	
7) How many nickels will I need to make \$5.70?	<u>$570 \div 5 = 114.$</u> <u>You would need 114 nickels.</u>	