

Name _____

Date _____




FRACTION SPOTTING SHEET 6

Frazer is going on a picnic with his friends.



Here are the fruit they take with them.



Help Frazer the Fraction Salamander to spot the fractions.

What fraction of the fruit are apples?

What fraction of the fruit are pears?

What fraction of the fruit are bananas?

Frazer eats an apple and a banana for his lunch.



What are the new fractions of each type of fruit?

Fraction of apples

Fraction of bananas

Fraction of pears

What do you notice about the total of the numerators in each situation?



Free Math Sheets, Math Games and Math Help


MATH-SALAMANDERS.COM

Name

Date



FRACTION SPOTTING SHEET 6 ANSWERS



What fraction of the fruit are apples?

 $\frac{3}{9}$

or

 $\frac{1}{3}$


What fraction of the fruit are pears?

 $\frac{1}{9}$

What fraction of the fruit are bananas?

 $\frac{5}{9}$

Frazer eats an apple and a banana for his lunch.



What are the new fractions of each type of fruit?

Fraction of apples

 $\frac{2}{7}$

Fraction of bananas

 $\frac{4}{7}$

Fraction of pears

 $\frac{1}{7}$

What do you notice about the total of the numerators in each situation?

$$3 + 1 + 5 = 9$$

$$2 + 1 + 4 = 7$$

The numerators all add up to the same number as the denominator to give the fraction one whole.



Free Math Sheets, Math Games and Math Help

MATH-SALAMANDERS.COM