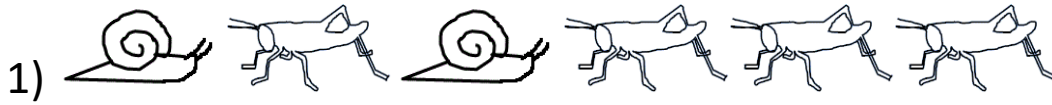


Name _____

Date _____




FRACTION SPOTTING SHEET 7




What fraction are snails?

What fraction are crickets?




What fraction are elephants?

What fraction are bears?



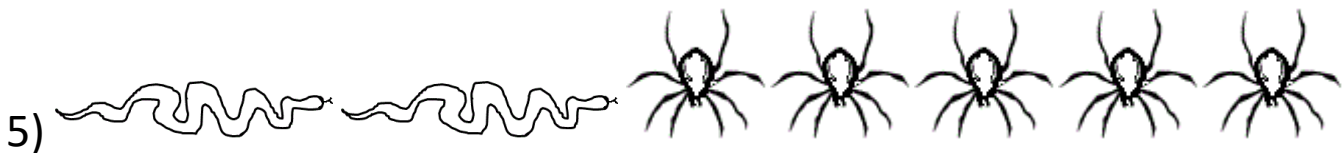
What fraction are dolphins?

What fraction are whales?




What fraction are birds?

What fraction are butterflies?



What fraction are snakes?

What fraction are spiders?



What fraction are starfish?

What fraction are not starfish?



Free Math Sheets, Math Games and Math Help

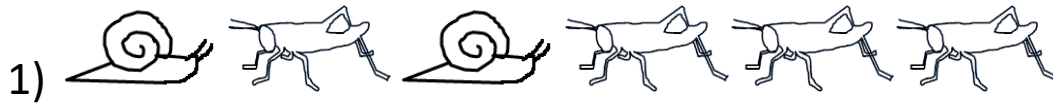
MATH-SALAMANDERS.COM

Name _____

Date _____



FRACTION SPOTTING SHEET 7 ANSWERS




What fraction are snails?

$\frac{2}{6}$

What fraction are crickets?

$\frac{4}{6}$



What fraction are elephants?

$\frac{3}{7}$

What fraction are bears?

$\frac{4}{7}$




What fraction are dolphins?

$\frac{3}{5}$

What fraction are whales?

$\frac{2}{5}$

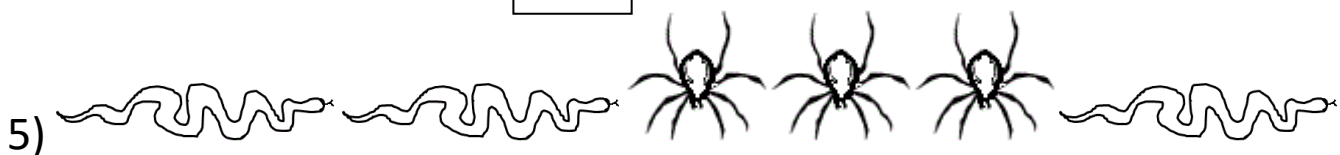


What fraction are birds?

$\frac{4}{10}$

What fraction are butterflies?

$\frac{6}{10}$

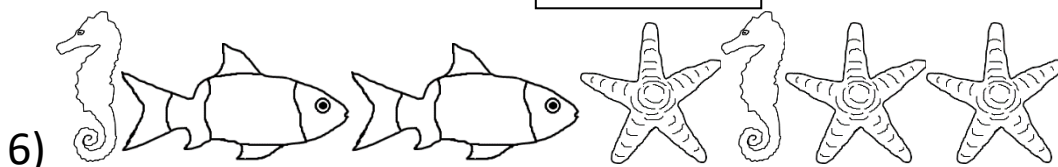


What fraction are snakes?

$\frac{3}{6}$ or $\frac{1}{2}$

What fraction are spiders?

$\frac{4}{6}$ or $\frac{2}{3}$



What fraction are starfish?

$\frac{3}{7}$

What fraction are not starfish?

$\frac{4}{7}$



Free Math Sheets, Math Games and Math Help

ATH-SALAMANDERS.COM