



FRACTION SPOTTING SHEET 8

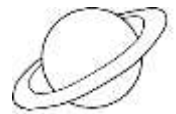
1) In a spelling test, Frazer gets 7 right and 3 wrong.

What fraction does he get right?



2) In the solar system, there are 8 planets. Four of them are gas giants.

What fraction of planets are gas giants?



3) In a survey, 5 kids chose football, 2 chose basketball and 1 chose tennis.


What fraction chose football?

4) In a fruit bowl, there are 4 oranges, 3 bananas and 5 apples.

What fraction of fruit are bananas?

Frazer eats an orange.

What fraction of the fruit are bananas now?



5) In Captain's aquarium, there are 6 goldfish, 2 pond snails and 5 minnows.

What fraction of the creatures are goldfish?

Captain buys 2 more goldfish for his aquarium.

What fraction of the creatures are goldfish now?





FRACTION SPOTTING SHEET 8 ANSWERS

1) In a spelling test, Frazer gets 7 right and 3 wrong.

What fraction does he get right?

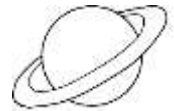
 $\frac{7}{10}$ 

2) In the solar system, there are 8 planets. Four of them are gas giants.

What fraction of planets are gas giants?

 $\frac{4}{8}$

or

 $\frac{1}{2}$ 


3) In a survey, 5 kids chose football, 2 chose basketball and 1 chose tennis.

What fraction chose football?

 $\frac{5}{8}$

4) In a fruit bowl, there are 4 oranges, 3 bananas and 5 apples.

What fraction of fruit are bananas?

 $\frac{3}{12}$ 

Frazer eats an orange.

What fraction of the fruit are bananas now?

 $\frac{3}{11}$

5) In Captain's aquarium, there are 6 goldfish, 2 pond snails and 5 minnows.

What fraction of the creatures are goldfish?

 $\frac{6}{13}$

Captain buys 2 more goldfish for his aquarium.

What fraction of the creatures are goldfish now?

 $\frac{8}{15}$ 