


Name

Date

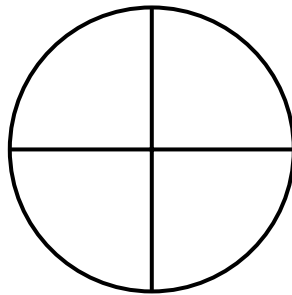


# FRACTIONS OF SHAPES 1

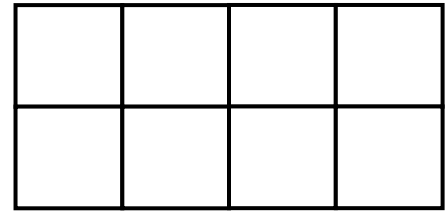
Shade the correct fraction of each shape.



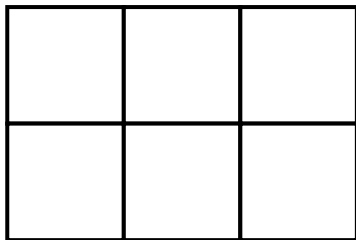
Shade  $\frac{1}{2}$



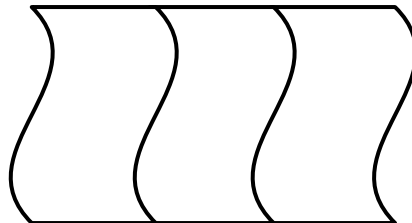
Shade  $\frac{1}{4}$



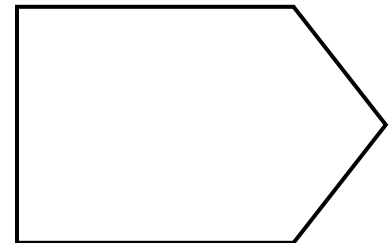
Shade  $\frac{5}{8}$




Shade  $\frac{4}{6}$



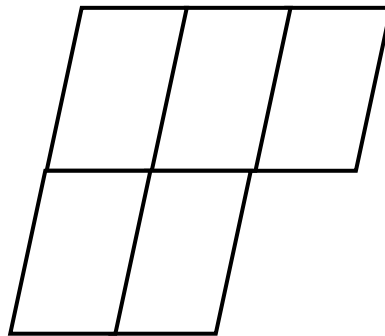
Shade  $\frac{2}{3}$



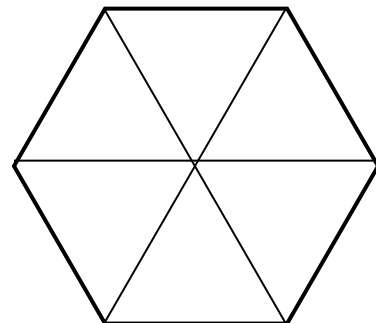
Shade  $\frac{1}{2}$



Shade  $\frac{3}{4}$



Shade  $\frac{4}{5}$



Shade  $\frac{5}{6}$




Name

Date

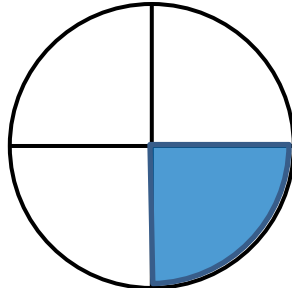


## FRACTIONS OF SHAPES 1 ANSWERS

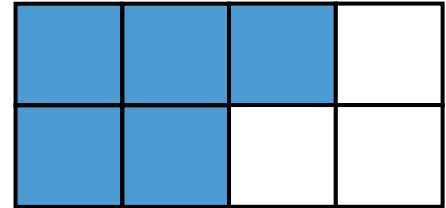
There are many different ways to shade in the correct fractions - here are some examples that work.



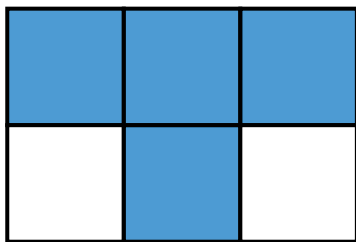
Shade  $\frac{1}{2}$




Shade  $\frac{1}{4}$



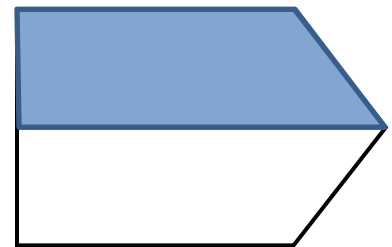
Shade  $\frac{5}{8}$



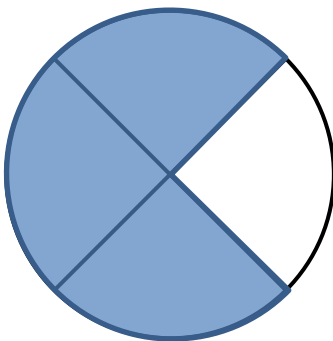
Shade  $\frac{4}{6}$



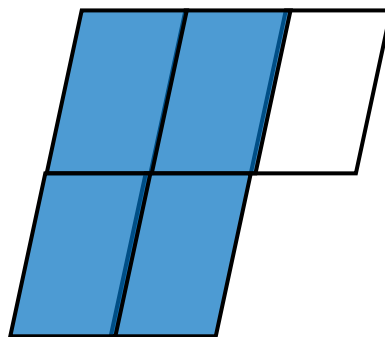
Shade  $\frac{2}{3}$



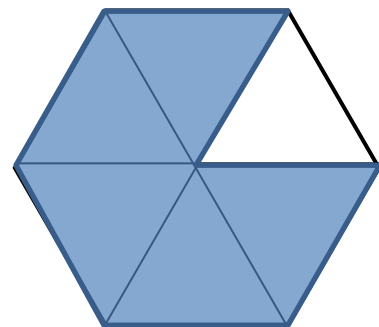
Shade  $\frac{1}{2}$



Shade  $\frac{3}{4}$



Shade  $\frac{4}{5}$



Shade  $\frac{5}{6}$