

Name

Date



# FUN ADDITION & SUBTRACTION TO 12 SHEET 1

Write in the answers to each fact in Sally's ball.

Math problems on the salamanders:

- Row 1:  $4 + 2$ ,  $6 - 3$ ,  $2 + 5$
- Row 2:  $5 - 5$ ,  $7 + 1$ ,  $7 - 2$
- Row 3:  $3 + 7$ ,  $9 - 3$ ,  $5 + 4$

Shade the balls as follows:

Answers from 0 to 4: **red**, 5 to 7: **green**, 8 to 10: **blue**.

Name






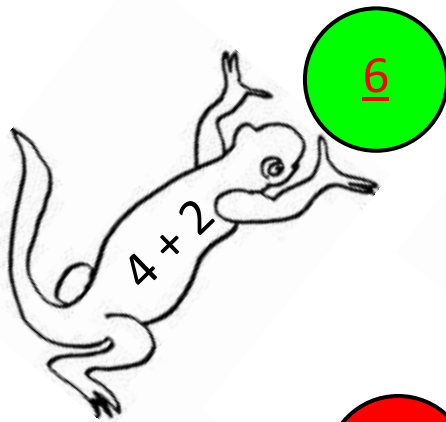
Date



# FUN ADDITION & SUBTRACTION TO 12

## SHEET 1 ANSWERS

Write in the answers to each fact in Sally's ball.



Shade the balls as follows:

Answers from 0 to 4: **red**, 5 to 7: **green**, 8 to 10: **blue**.

