

Name

Date



# CAPTAIN'S SQUARE PUZZLE 1

Each Salamander has a value shown in the boxes below.



1



4



2



3

Work out the total of each horizontal and vertical line of salamanders.


= 10

= \_\_\_\_

= \_\_\_\_

= \_\_\_\_

= 13

= \_\_\_\_

= \_\_\_\_

= \_\_\_\_

1	2	3	4	5	6	7	8	9	10	11	12	13	14	15
---	---	---	---	---	---	---	---	---	----	----	----	----	----	----



Free Math Sheets, Math Games and Math Help

MATH-SALAMANDERS.COM

Name

Date



# CAPTAIN'S SQUARE PUZZLE 1 ANSWERS

Each Salamander has a value shown in the boxes below.



1



4



















2



3

Work out the total of each horizontal and vertical line of salamanders.

= 10

= 9

= 7

= 12

= 13

= 6

= 12

= 7



Free Math Sheets, Math Games and Math Help

MATH-SALAMANDERS.COM