

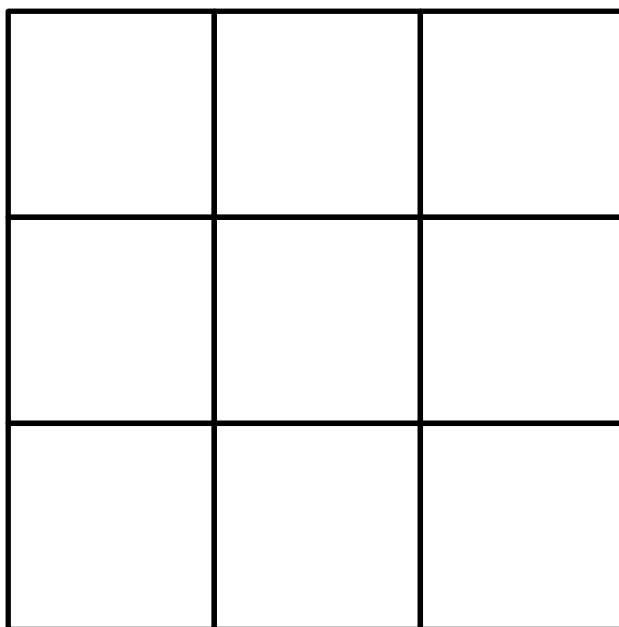


Name

Date

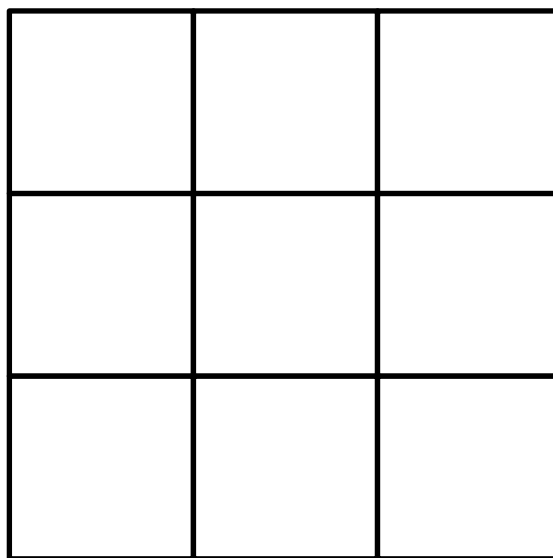
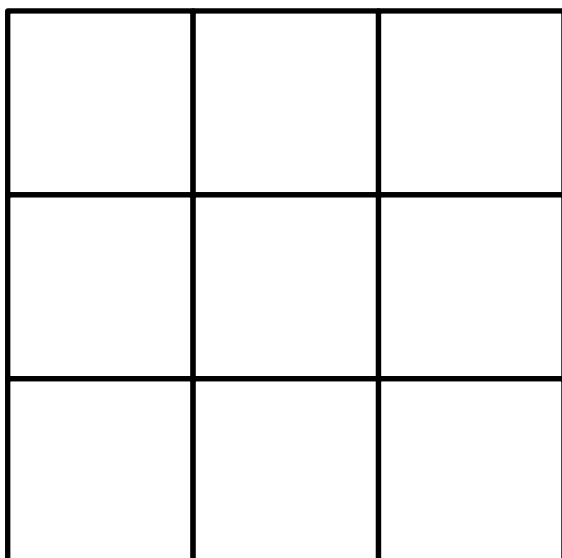


# SALAMANDER LINE-UP PUZZLE 1

Place all 3 Captain Salamanders in the squares on the board so that **no** salamander is in the same line (either horizontal or vertical) as another. The salamanders in this challenge can be in the same diagonal line!



Can you find two more different ways do it?



Free Math Sheets, Math Games and Math Help

MATH-SALAMANDERS.COM

Name

Date



## SALAMANDER LINE-UP PUZZLE 1 ANSWERS

Place all 3 Salamanders in the squares on the board so that no salamander is in the same line (either horizontal or vertical) as another salamander. The salamanders can be in the same diagonal line!

X		
	X	
		X

	X	
X		
		X

		X
	X	
X		

X		
		X
	X	

		X
X		
	X	

	X	
		X
X		

There are 6 solutions to this challenge.



Free Math Sheets, Math Games and Math Help

[MATH-SALAMANDERS.COM](http://MATH-SALAMANDERS.COM)