

Name

Date



CAPTAIN'S SQUARE PUZZLE 2

Each Salamander has a value shown in the boxes below.



6



5



















4



3

Work out the total of each horizontal and vertical line of salamanders.

= 22

= _____

= _____

= _____

= 17

= _____

= _____

= _____



Free Math Sheets, Math Games and Math Help

MATH-SALAMANDERS.COM

Name

Date



CAPTAIN'S SQUARE PUZZLE 2 ANSWERS

Each Salamander has a value shown in the boxes below.



6



5



4



3

Work out the total of each horizontal and vertical line of salamanders.

				= 22
				= 19
				= 19
				= 15
= 17	= 22	= 17	= 19	