

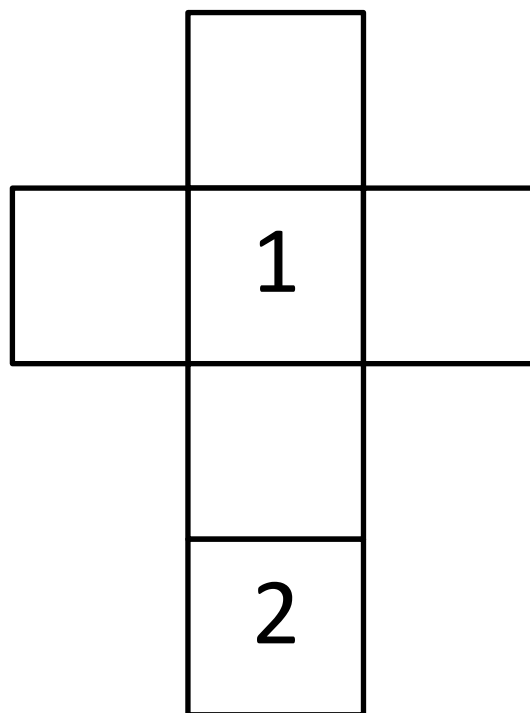
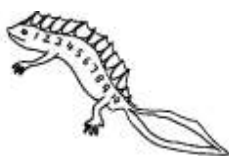


## NEWTON'S CROSSES PUZZLE 2

1) Write the numbers 3, 4, 5 and 6 in the correct place so that each line of the cross adds up to 11.

3   4   5   6

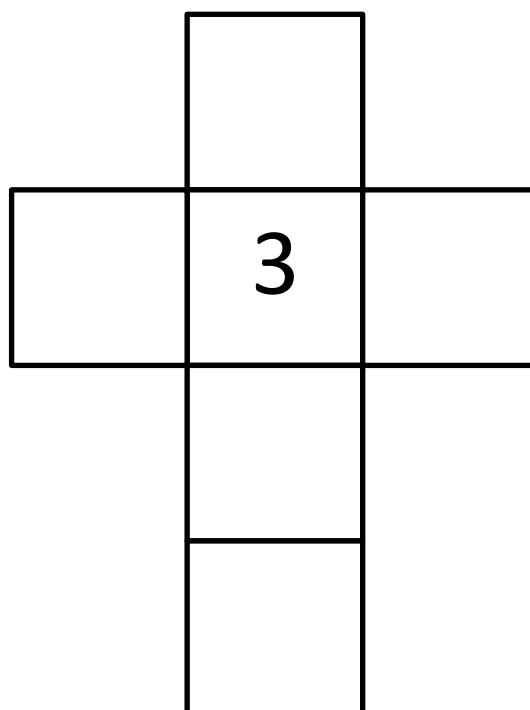
Total must be 11



2) Write the numbers 1, 2, 4, 5 and 6 in the squares so that each line of the cross adds up to 12.

1   2   4   5   6

Total must be 12





## NEWTON'S CROSSES PUZZLE 2 ANSWERS

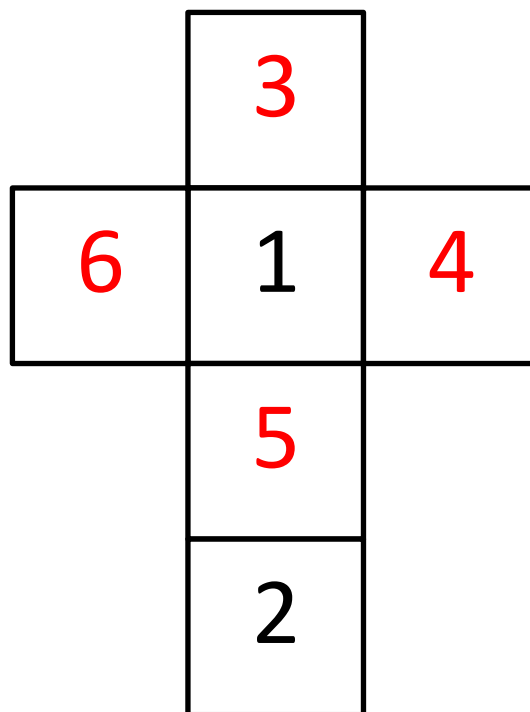
Please note that there are several solutions for each cross puzzle. As long as the number in the center of the cross is the same as the solution below, and the rows and columns contain the same numbers then the answer should work even if the numbers are in a different place.

**One** solution for each puzzle is given.

1)

3   4   5   6

Total must be 11



2)

1   2   4   5   6

Total must be 12

