

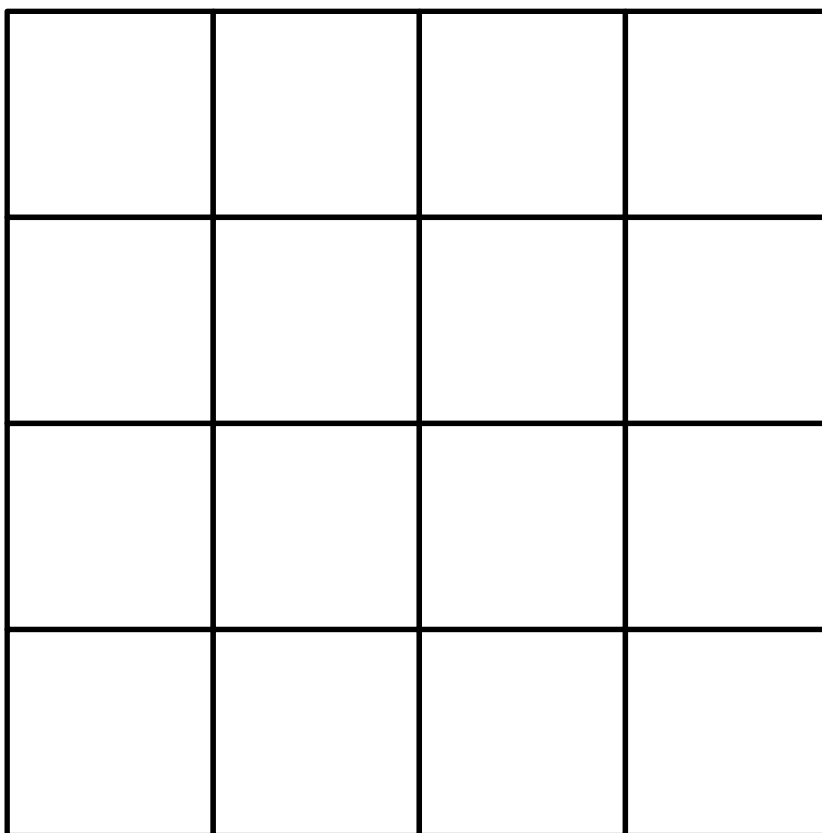



Name _____

Date _____



SALAMANDER LINE-UP PUZZLE 2

Place all 4 Captain Salamanders in the squares on the board so that none of the captains is in the same line (either horizontal, vertical or diagonal) as another.



There are 2 different ways to solve this puzzle.
Can you find them both?



Free Math Sheets, Math Games and Math Help

MATH-SALAMANDERS.COM



SALAMANDER LINE-UP PUZZLE 2 ANSWERS

Place all 4 Salamanders in the squares on the board so that no salamander is in the same line (either horizontal, vertical or diagonal) as another salamander.

There are 2 solutions to this challenge.

It does not matter which salamander goes in which square.

		X	
X			
			X
	X		

	X		
			X
X			
		X	

