

Name \_\_\_\_\_

Date \_\_\_\_\_


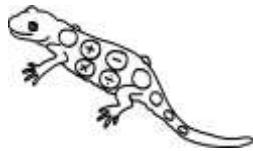


## QUADRA'S SQUARE PUZZLE 3

1) Write the numbers 10, 20, 30, 40, 60, 70 and 80 in the correct place so that each side of the square adds up to 150.

10   20   30   40   60   70   80


Total must be 150



2) Can you write the numbers 10, 20, 30, 40, 60, 70, 80 in the correct place so that each side of the square adds up to 120?

10   20   30   40   60   70   80

Total must be 120



Free Math Sheets, Math Games and Math Help

MATH-SALAMANDERS.COM



## QUADRA'S SQUARE PUZZLE 3 ANSWERS

Please note that there are several solutions for each square puzzle. As long as the rows and columns contain the same numbers then the answer should work even if the numbers are in a different place.

**One** solution for each puzzle is given.

1)

10 20 30 40 60 70 80

Total must be 150

70	20	60
50		10
30	40	80

2)

10 20 30 40 60 70 80

Total must be 120

60	40	20
50		70
10	80	30

