

Name

















Date



# CAPTAIN'S SQUARE PUZZLE 5

Each salamander is worth a different value between 0.1 and 0.9.

The total of each vertical line of salamanders is worked out for you.

= 2.4

= 2.3


= 2

= 1.9

How much is each salamander worth?











Free Math sheets, Math games and Math help

MATH-SALAMANDERS.COM

Name

















Date



# CAPTAIN'S SQUARE PUZZLE 5 ANSWERS

Each salamander is worth a different value between 0.1 and 0.9.

The total of each vertical line of salamanders is worked out for you.

= 2.4

= 2.3

= 2

= 1.9

How much is each salamander worth?



0.6



0.8



0.5



0.4



Free Math sheets, Math games and Math help

MATH-SALAMANDERS.COM