

Name

Date



## 2D SHAPE - CAN YOU DRAW IT? SHEET 1

If you can draw the shape, then draw it in the space below. If it is impossible to draw, write down 'impossible' in the box below.

1) Can you draw a triangle with a line of symmetry?	2) Can you draw a quadrilateral with just 2 right angles?
3) Can you draw a triangle with exactly 2 right angles?	4) Can you draw a pentagon with just 1 mirror line?
5) Can you draw a quadrilateral with 1 pair of parallel lines?	6) Can you draw a triangle with two acute angles?



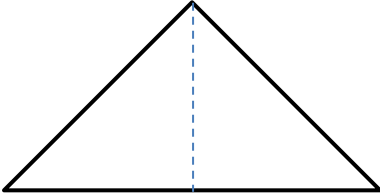
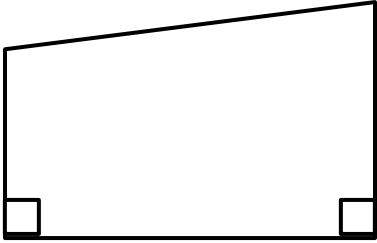
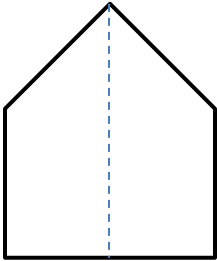
Name

Date



## 2D SHAPE - CAN YOU DRAW IT? SHEET 1 ANSWERS

Below is an example of each of the shapes that can be drawn - there are many more valid answers for each example that works.

1) Can you draw a triangle with a line of symmetry?	2) Can you draw a quadrilateral with just 2 right angles?
	
3) Can you draw a triangle with exactly 2 right angles?	4) Can you draw a pentagon with just 1 mirror line?
<p style="text-align: center; color: red;">impossible</p>	
5) Can you draw a quadrilateral with 1 pair of parallel lines?	6) Can you draw a triangle with two acute angles?
