

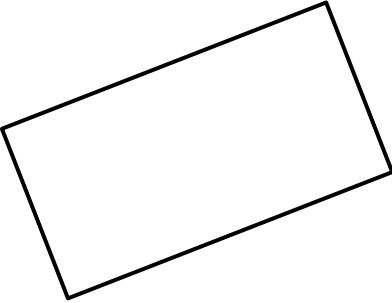
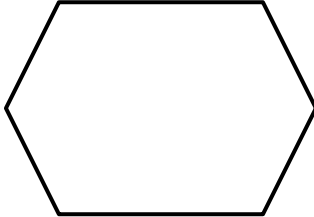
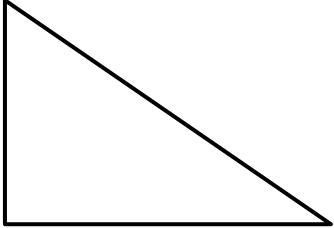


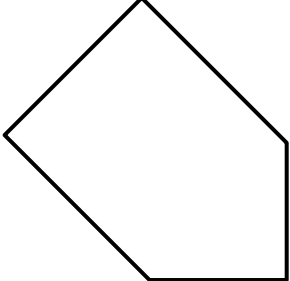
Name

Date



# 2D SHAPE PROPERTIES SHEET 1

For each of the shapes below, fill in the number of sides, mark on and write down the number of right angles, and write down the name of the shape.

		
Sides: Right angles: Name of shape	Sides: Right angles: Name of shape	Sides: Right angles: Name of shape
		
Sides: Right angles: Name of shape	Sides: Right angles: Name of shape	Sides: Right angles: Name of shape

Pentagon	Parallelogram	Right triangle
Isosceles Triangle	Hexagon	Rectangle

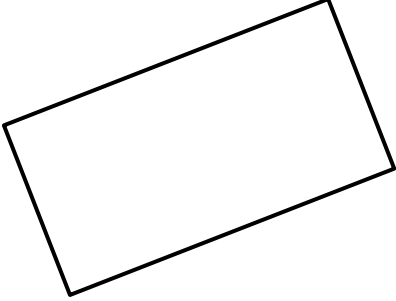
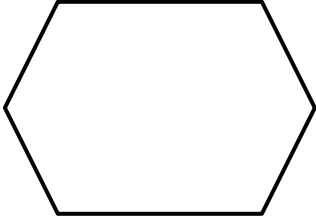
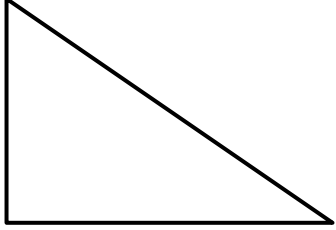
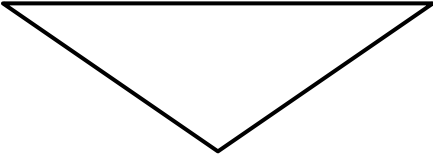

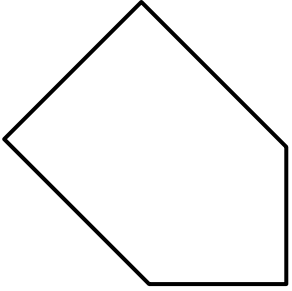


Name

Date



## 2D SHAPE PROPERTIES SHEET 1 ANSWERS

		
Sides: <b>4</b> Right angles: <b>4</b> Name of shape <b>Rectangle</b>	Sides: <b>6</b> Right angles: <b>0</b> Name of shape <b>Hexagon</b>	Sides: <b>3</b> Right angles: <b>1</b> Name of shape <b>Right triangle</b>
		
Sides: <b>3</b> Right angles: <b>0</b> Name of shape <b>Isosceles Triangle</b>	Sides: <b>4</b> Right angles: <b>0</b> Name of shape <b>Parallelogram</b>	Sides: <b>5</b> Right angles: <b>3</b> Name of shape <b>Pentagon</b>

