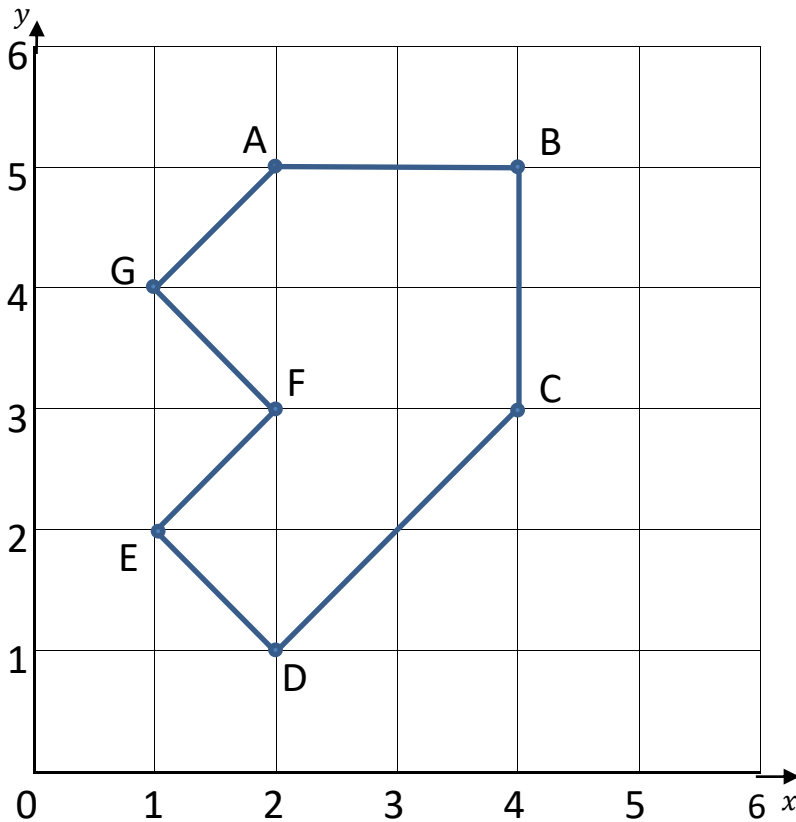


Name _____

Date _____



PLOT THE COORDINATES SHEET 2



1) Write down the coordinates of the points on the first grid.

A (__, __)

B (__, __)

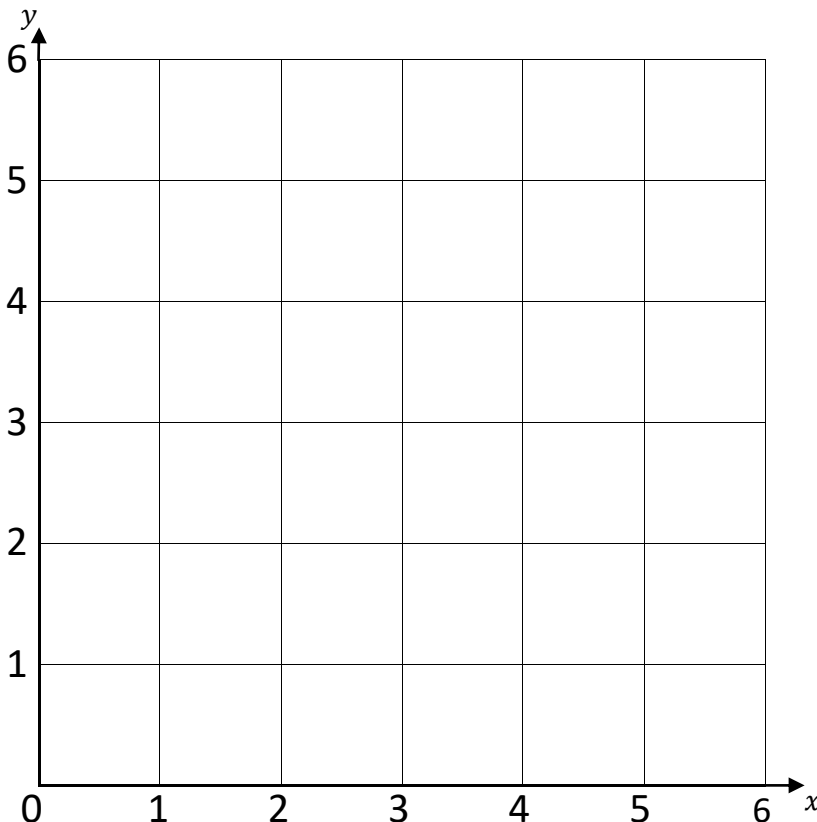
C (__, __)

D (__, __)

E (__, __)

F (__, __)

G (__, __)



2) Plot these coordinates on this grid: (1,2) (2,4) (4,3)

3) Plot the 4th point so that the four coordinates make a square.

What is the coordinate of the 4th point? (__, __)

4) Plot another square that has no horizontal or vertical lines. What are the 4 coordinates?

(__, __)

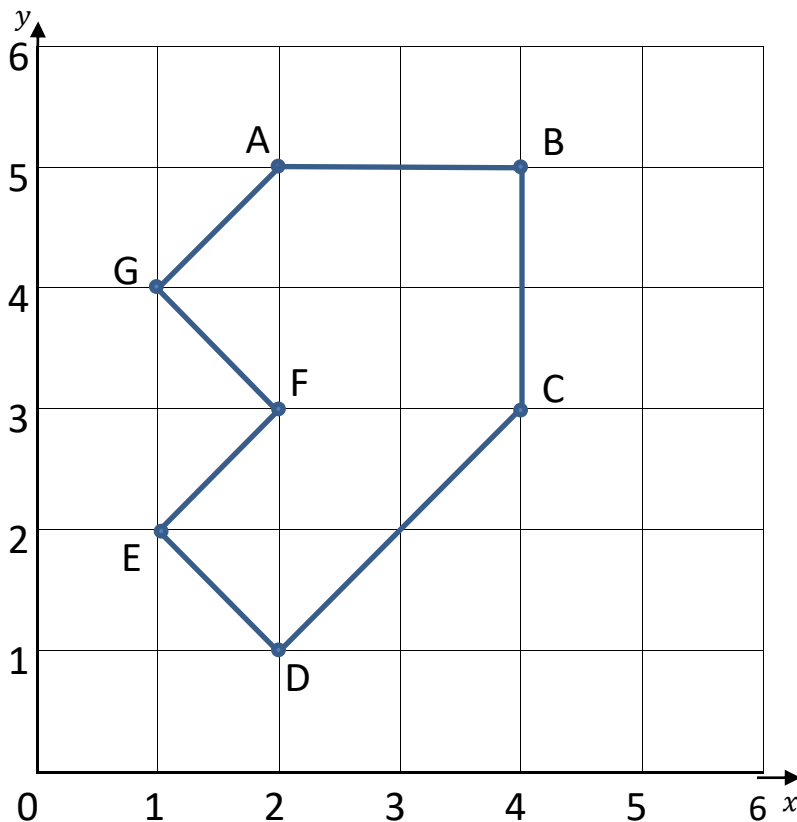
(__, __)

(__, __)

(__, __)



PLOT THE COORDINATES SHEET 2 ANSWERS



1) Write down the coordinates of the points on the first grid.

A (2,5)

B (4,5)

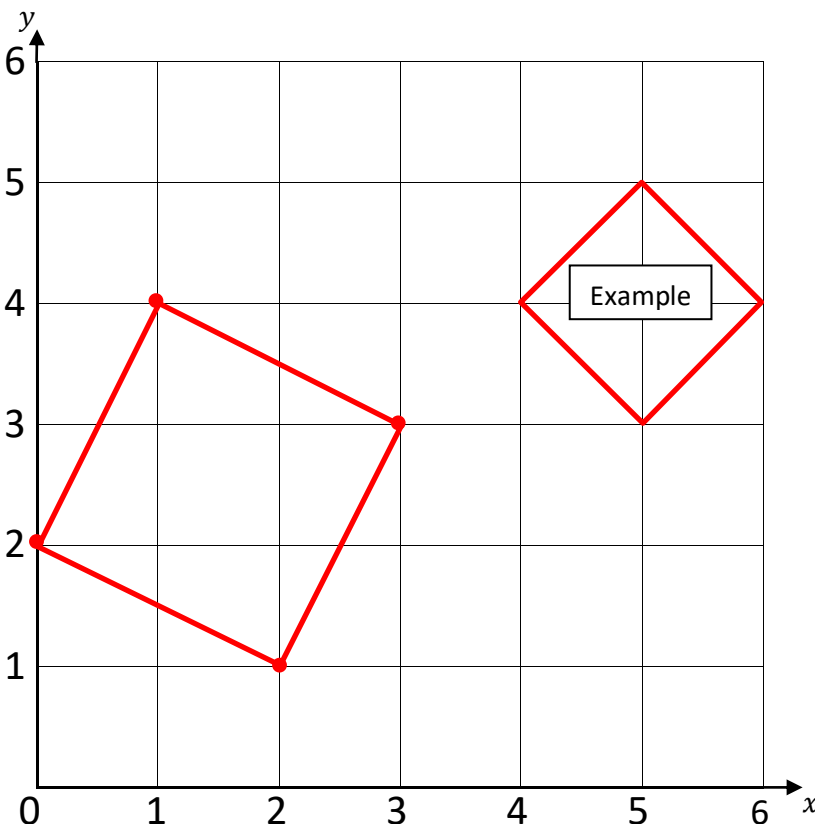
C (4,3)

D (2,1)

E (1,2)

F (2,3)

G (1,4)



2) Plot these coordinates on this grid: (0,2) (1,4) (3,3)

3) Plot the 4th point so that the four coordinates make a square.

What is the coordinate of the 4th point? (2,1)

4) Plot another square that has no horizontal or vertical lines. What are the 4 coordinates?

In example shown:

(4,4) (5,5) (6,4) (5,3)