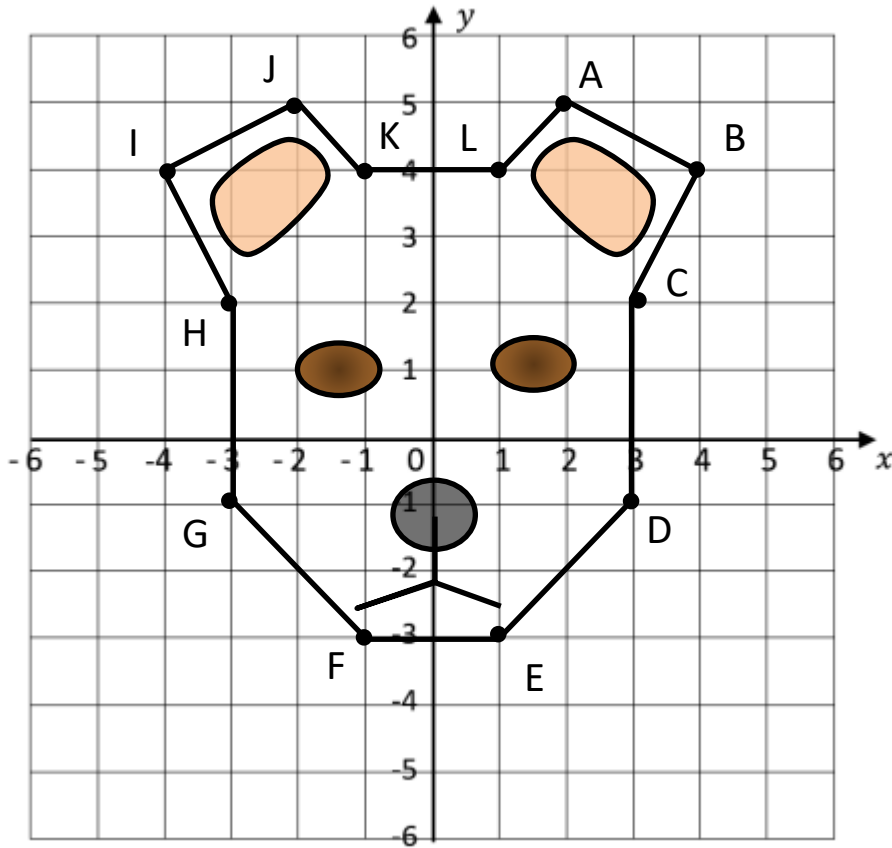


Name _____

Date _____

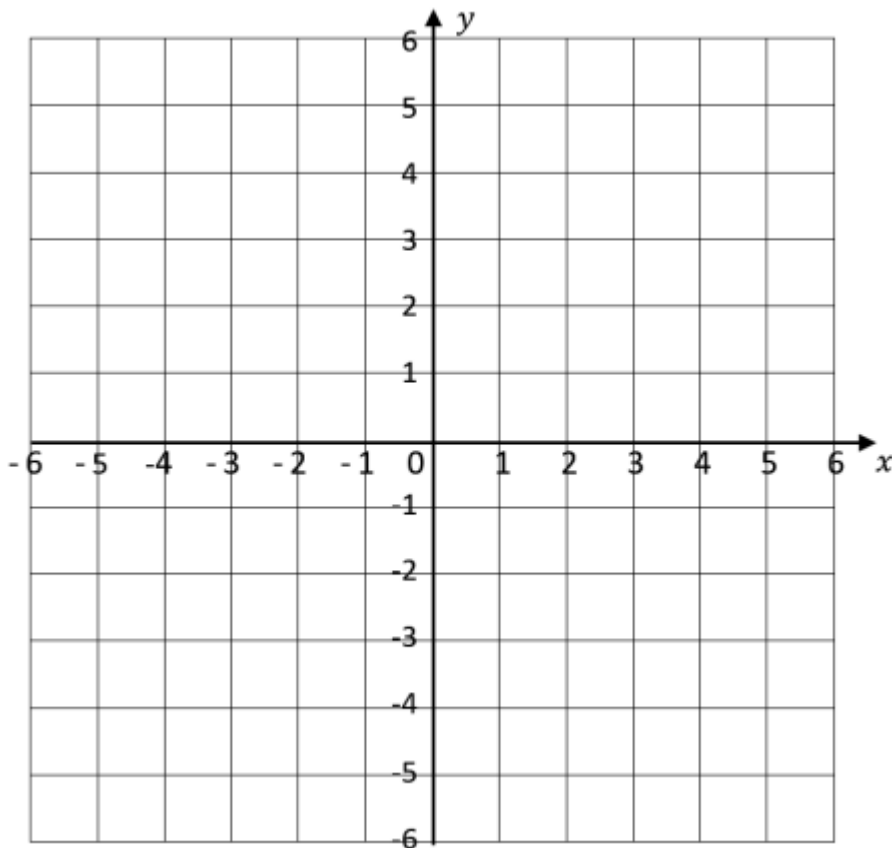


FIND AND PLOT THE COORDINATES 2



1) Write down the coordinates of each point of the face.

A (,)	G (,)
B (,)	H (,)
C (,)	I (,)
D (,)	J (,)
E (,)	K (,)
F (,)	L (,)



2) Draw your own face using the grid below and write down the coordinates of the outline.

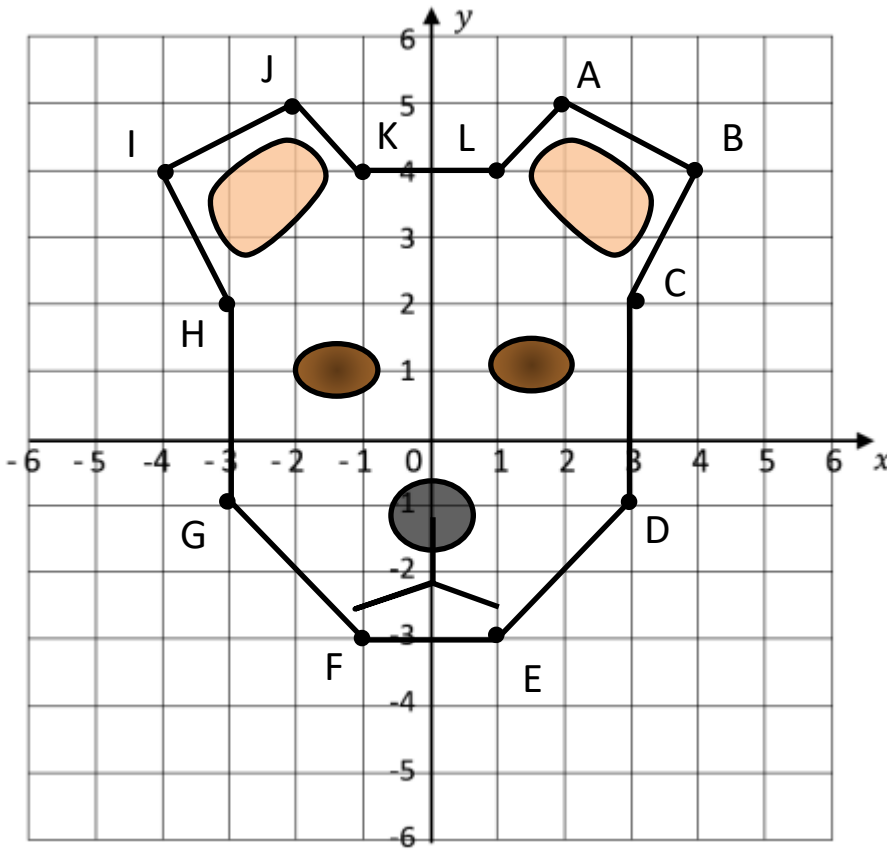
A (,)	H (,)
B (,)	I (,)
C (,)	J (,)
D (,)	K (,)
E (,)	L (,)
F (,)	M (,)
G (,)	N (,)

Name

Date



FIND AND PLOT THE COORDINATES 2 ANSWERS



2) Write down the coordinates of each point of the face.

A (2, 5)	G (-3, -1)
B (4, 4)	H (-3, 2)
C (3, 2)	I (-4, 4)
D (3, -1)	J (-2, 5)
E (1, -3)	K (-1, 4)
F (-1, -3)	L (1, 4)