

Name _____

Date _____



GEOMETRY RIDDLES 3A

The answer for each riddle is one of the shapes in the middle.

Find the correct answer to each, and success is within your reach!

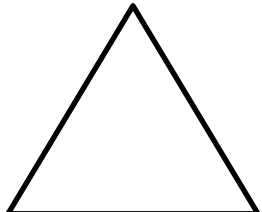







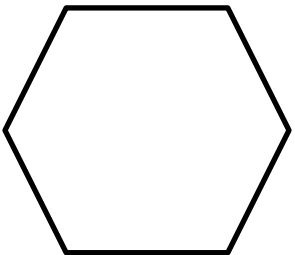
- 1) • I have no right angles.
• I am not a quadrilateral.
• All my sides are equal length.
• I have more than 4 sides.
• Who am I?

- 2) • I am a quadrilateral.
• I have one line of symmetry.
• I have one pair of parallel lines.
• Who am I?



Shape ____

Shape ____

A 	B 	C 
D 	E 	F 
G 	H 	I 



GEOMETRY RIDDLES 3A ANSWERS

- 1) • I have no right angles.
 • I am not a quadrilateral.
 • All my sides are equal length.
 • I have more than 4 sides.
 • Who am I?
- 2) • I am a quadrilateral.
 • I have one line of symmetry.
 • I have one pair of parallel lines.
 • Who am I?

Shape **I**

Shape **C**

