

Name _____

Date _____



GEOMETRY RIDDLES 4A

The answer for each riddle is one of the shapes in the middle.

Find the correct answer to each, and success is within your reach!

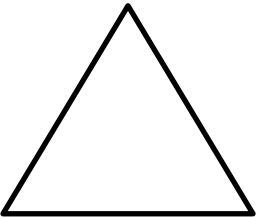
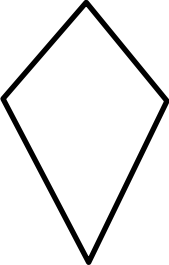

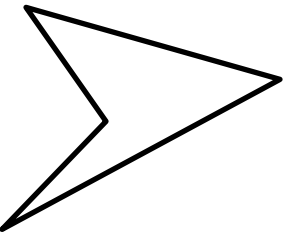

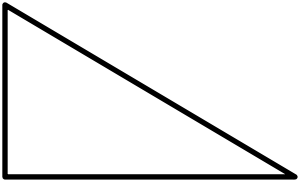

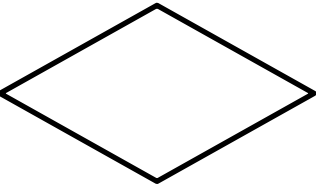

- 1) • I am a quadrilateral.
• I am not a regular shape.
• I have 2 acute angles.
• My sides are all equal length.
• Who am I?

- 2) • I have no parallel sides.
• I am not regular.
• I have no lines of symmetry.
• I have a reflex angle.
• Who am I?



Shape ____

Shape ____

A 	B 	C 
D 	E 	F 
G 	H 	I 





GEOMETRY RIDDLES 4A ANSWERS

- 1) • I am a quadrilateral.
 • I am not a regular shape.
 • I have 2 acute angles.
 • My sides are all equal length.
 • Who am I?
- 2) • I have no parallel sides.
 • I am not regular.
 • I have no lines of symmetry.
 • I have a reflex angle.
 • Who am I?

Shape **H**

Shape **D**

