



GEOMETRY RIDDLES 5B

The answer for each riddle is one of the shapes in the middle.

Find the correct answer to each, and success is within your reach!

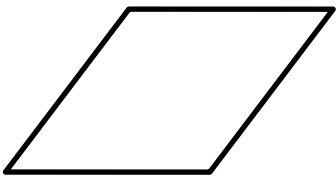
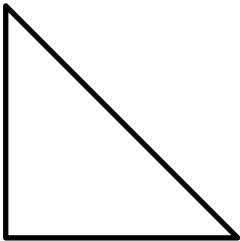

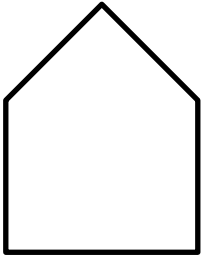
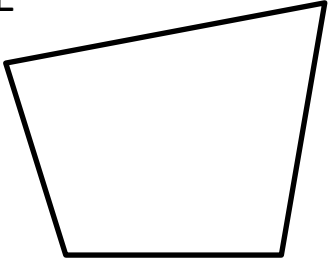
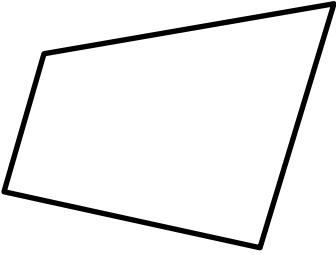
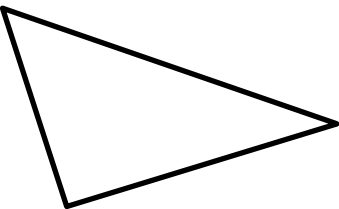
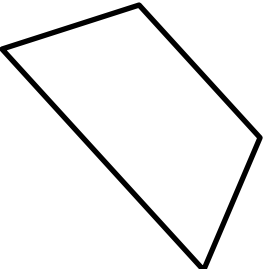
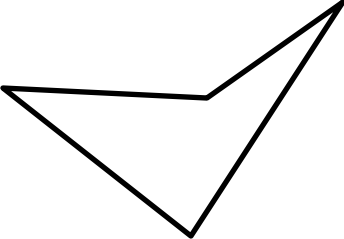
- 1) • I am not a regular shape.
 • I have no parallel lines.
 • I have some acute and some obtuse angles.
 • Who am I?

Shape _____

- 2) • I have some parallel lines.
 • I have a line of symmetry.
 • I have no right angles.
 • My sides are not all the same length.
 • Who am I?

Shape _____



<p>A</p> 	<p>B</p> 	<p>C</p> 
<p>D</p> 	<p>E</p> 	<p>F</p> 
<p>G</p> 	<p>H</p> 	<p>I</p> 



Name

Date



GEOMETRY RIDDLES 5B ANSWERS

- 1) • I am not a regular shape.
• I have no parallel lines.
• I have some acute and some obtuse angles.
• Who am I?
- 2) • I have some parallel lines.
• I have a line of symmetry.
• I have no right angles.
• My sides are not all the same length.
• Who am I?

Shape **E**

Shape **H**

