

Name

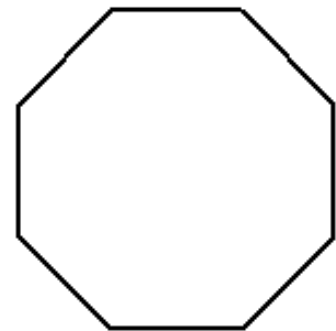
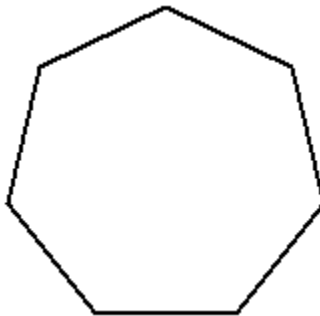
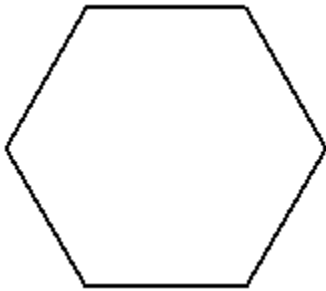
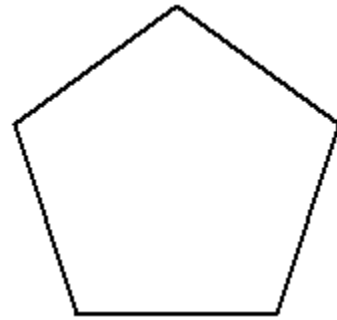
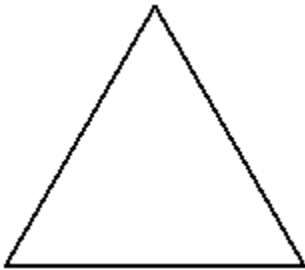
Date



TESSELLATIONS – REGULAR POLYGONS


Have a look at these regular polygons and predict which ones tessellate.

Now trace them onto a piece of paper (or print them onto card and cut them out) and try to draw them next to one another with no spaces.



Name

Date



TESSELLATIONS – REGULAR POLYGONS ANSWERS

These regular polygons tessellate:

