



























ADDITION PROBLEMS TO 10 SHEET 2

		WORKING OUT
1)	<p>There are 4 .</p> <p>4  more come.</p> <p>How many now? _____</p>	
2)	<p>I have 6 .</p> <p>I buy 3  more.</p> <p>How many do I have now? _____</p>	
3)	<p>Joey catches 7 .</p> <p>Julie catches 3 .</p> <p>What is the sum? _____</p>	
4)	<p>There are 5 .</p> <p>5  more come.</p> <p>How many in total? _____</p>	
5)	<p>I have 6 .</p> <p>I get 4  more.</p> <p>How many do I have now? _____</p>	
6)	<p>I see 2 .</p> <p>I see 6  more.</p> <p>What is the sum? _____</p>	



ADDITION PROBLEMS TO 10 SHEET 2 ANSWERS

		WORKING OUT
1)	There are 4  . 4  more come. How many now? <u>8</u>	
2)	I have 6  . I buy 3  more. How many do I have now? <u>9</u>	
3)	Joey catches 7  . Julie catches 3  . What is the sum? <u>10</u>	
4)	There are 5  . 5  more come. How many in total? <u>10</u>	
5)	I have 6  . I get 4  more. How many do I have now? <u>10</u>	
6)	I see 2  . I see 6  more. What is the sum? <u>8</u>	