





















ADDITION PROBLEMS TO 10 SHEET 3



















		WORKING OUT
1)	<p>I buy 3  on Monday.</p> <p>I buy 1  on Tuesday.</p> <p>I buy 2  on Wednesday.</p> <p>How many  in total? _____</p>	
2)	<p>There are 4 .</p> <p>There are 3 .</p> <p>There is 1 .</p> <p>What is the sum? _____</p>	
3)	<p>Flame has 2 . Tyger has 3 .</p> <p>Sally has 4 .</p> <p>How many in all? _____</p>	
4)	<p>The bakery sells 2  on Monday,</p> <p>5  on Tuesday and</p> <p>3  on Wednesday.</p> <p>How many  in total? _____</p>	
5)	<p>Captain has 4 . Sally has 2 .</p> <p>Newton has 4 .</p> <p>How many  in total? _____</p>	

Name

Date



ADDITION PROBLEMS TO 10 SHEET 3 ANSWERS

		WORKING OUT
1)	<p>I buy 3  on Monday.</p> <p>I buy 1  on Tuesday.</p> <p>I buy 2  on Wednesday.</p> <p>How many  in total? <u>6</u></p>	
2)	<p>There are 4 .</p> <p>There are 3 .</p> <p>There is 1 .</p> <p>What is the sum? <u>8</u></p>	
3)	<p>Flame has 2 . Tyger has 3 .</p> <p>Sally has 4 .</p> <p>How many in all? <u>9</u></p>	
4)	<p>The bakery sells 2  on Monday,</p> <p>5  on Tuesday and</p> <p>3  on Wednesday.</p> <p>How many  in total? <u>10</u></p>	
5)	<p>Captain has 4 . Sally has 2 .</p> <p>Newton has 4 .</p> <p>How many  in total? <u>10</u></p>	