































ADDITION PROBLEMS TO 15 SHEET 2

		WORKING OUT
1)	There are 12  . 2 more  come along. How many are there now? _____	
2)	I buy 6  on Monday. I buy 6 more  on Tuesday. How many  in all? _____	
3)	There are 5  in a race. 7 more  join in . How many  in total? _____	
4)	There are 7  in a pond. 7 more  come into the pond. How many  now? _____	
5)	Sally buys 9  . Captain buys 4  . How many  in all? _____	



ADDITION PROBLEMS TO 15 SHEET 2 ANSWERS

		WORKING OUT
1)	<p>There are 12 .</p> <p>2 more  come along.</p> <p>How many are there now? <u>14</u></p>	
2)	<p>I buy 6  on Monday.</p> <p>I buy 6 more  on Tuesday.</p> <p>How many  in all? <u>12</u></p>	
3)	<p>There are 5  in a race.</p> <p>7 more  join in .</p> <p>How many  in total? <u>12</u></p>	
4)	<p>There are 7  in a pond.</p> <p>7 more  come into the pond.</p> <p>How many  now? <u>14</u></p>	
5)	<p>Sally buys 9 .</p> <p>Captain buys 4 .</p> <p>How many  in all? <u>13</u></p>	