
























ADDITION PROBLEMS TO 15 SHEET 3

		WORKING OUT
1)	<p>On Monday, I buy 4  .</p> <p>On Tuesday, I buy 5  .</p> <p>On Wednesday, I buy 3  .</p> <p>How many  in total? _____</p>	
2)	<p>Tyger has 6  . Sally has 3  .</p> <p>Frazer has 4  .</p> <p>How many  in all? _____</p>	
3)	<p>I buy 5  .</p> <p>A week later I buy 2  .</p> <p>Two weeks later, I buy 6  .</p> <p>How many  do I have? _____</p>	
4)	<p>There are 7  .</p> <p>4 more  are built.</p> <p>Next year, 3 more  are built.</p> <p>How many  in all? _____</p>	



ADDITION PROBLEMS TO 15 SHEET 3 ANSWERS

		WORKING OUT
1)	<p>On Monday, I buy 4 .</p> <p>On Tuesday, I buy 5 .</p> <p>On Wednesday, I buy 3 .</p> <p>How many  in total? <u>12</u></p>	
2)	<p>Tyger has 6 . Sally has 3 .</p> <p>Frazer has 4 .</p> <p>How many  in all? <u>13</u></p>	
3)	<p>I buy 5 .</p> <p>A week later I buy 2 .</p> <p>Two weeks later, I buy 6 .</p> <p>How many  do I have? <u>13</u></p>	
4)	<p>There are 7 .</p> <p>4 more  are built.</p> <p>Next year, 3 more  are built.</p> <p>How many  in all? <u>14</u></p>	