























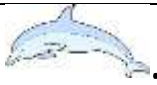







ADDITION PROBLEMS TO 20 SHEET 1

		WORKING OUT
1)	<p>I eat 12  .</p> <p>Next week I eat 5  .</p> <p>How many  did I eat? _____</p>	
2)	<p>There are 10  .</p> <p>6 more  come.</p> <p>How many  in all? _____</p>	
3)	<p>Frazer has 14  .</p> <p>Sally has 4  .</p> <p>What is the sum? _____</p>	
4)	<p>Tyger has 9¢.</p> <p>He gets 6¢ more.</p> <p>How much money does he have? _____ ¢</p>	
5)	<p>There are 5  .</p> <p>10 more  come along.</p> <p>How many  are there now? _____</p>	
6)	<p>There are 6  in a road.</p> <p>11 more  drive into the road.</p> <p>How many  in the road now? _____</p>	



ADDITION PROBLEMS TO 20 SHEET 1 ANSWERS

		WORKING OUT
1)	<p>I eat 12  .</p> <p>Next week I eat 5  .</p> <p>How many  did I eat? <u>17</u></p>	<u>$12 + 5 = 17$</u>
2)	<p>There are 10  .</p> <p>6 more  come.</p> <p>How many  in all? <u>16</u></p>	<u>$10 + 6 = 16$</u>
3)	<p>Frazer has 14  .</p> <p>Sally has 4  .</p> <p>What is the sum? <u>18</u></p>	<u>$14 + 4 = 18$</u>
4)	<p>Tyger has 9¢.</p> <p>He gets 6¢ more.</p> <p>How much money does he have? <u>15</u> ¢</p>	<u>$9 + 6 = 15$</u>
5)	<p>There are 5  .</p> <p>10 more  come along.</p> <p>How many  are there now? <u>15</u></p>	<u>$5 + 10 = 15$</u>
6)	<p>There are 6  in a road.</p> <p>11 more  drive into the road.</p> <p>How many  in the road now? <u>17</u></p>	<u>$6 + 11 = 17$</u>