



























ADDITION PROBLEMS TO 20 SHEET 2

		WORKING OUT
1)	<p>I have 13  .</p> <p>I buy 5 more  .</p> <p>How many  do I have now? _____</p>	
2)	<p>There are 8  in a zoo.</p> <p>9 more  join.</p> <p>How many  in total? _____</p>	
3)	<p>Sally has 10¢.</p> <p>Newton has 7¢.</p> <p>How much money in all? _____ ¢</p>	
4)	<p>There are 6  in a pond.</p> <p>14 more  are added.</p> <p>How many  altogether? _____</p>	
5)	<p>I catch 12  in my net.</p> <p>Next day I catch 6  .</p> <p>How many  did I catch in all? _____</p>	



ADDITION PROBLEMS TO 20 SHEET 2 ANSWERS

		WORKING OUT
1)	<p>I have 13 .</p> <p>I buy 5 more .</p> <p>How many  do I have now? <u>18</u></p>	
2)	<p>There are 8  in a zoo.</p> <p>9 more  join.</p> <p>How many  in total? <u>17</u></p>	
3)	<p>Sally has 10¢.</p> <p>Newton has 7¢.</p> <p>How much money in all? <u>17</u>¢</p>	
4)	<p>There are 6  in a pond.</p> <p>14 more  are added.</p> <p>How many  altogether? <u>20</u></p>	
5)	<p>I catch 12  in my net.</p> <p>Next day I catch 6 .</p> <p>How many  did I catch in all? <u>18</u></p>	