



























ADDITION PROBLEMS TO 20 SHEET 2UK

		WORKING OUT
1)	<p>I have 13  .</p> <p>I buy 5 more  .</p> <p>How many  do I have now? _____</p>	
2)	<p>There are 8  in a zoo.</p> <p>9 more  join.</p> <p>How many  in total? _____</p>	
3)	<p>Sally has 10p.</p> <p>Newton has 7p.</p> <p>How much money in all? _____ p</p>	
4)	<p>There are 6  in a pond.</p> <p>14 more  are added.</p> <p>How many  altogether? _____</p>	
5)	<p>I catch 12  in my net.</p> <p>Next day I catch 6  .</p> <p>How many  did I catch in all? _____</p>	



ADDITION PROBLEMS TO 20 SHEET 2UK ANSWERS

		WORKING OUT
1)	<p>I have 13  .</p> <p>I buy 5 more  .</p> <p>How many  do I have now? <u>18</u></p>	<u>$13 + 5 = 18$</u>
2)	<p>There are 8  in a zoo.</p> <p>9 more  join.</p> <p>How many  in total? <u>17</u></p>	<u>$8 + 9 = 17$</u>
3)	<p>Sally has 10p.</p> <p>Newton has 7p.</p> <p>How much money in all? <u>17</u> p</p>	<u>$10 + 7 = 17$</u>
4)	<p>There are 6  in a pond.</p> <p>14 more  are added.</p> <p>How many  altogether? <u>20</u></p>	<u>$6 + 14 = 20$</u>
5)	<p>I catch 12  in my net.</p> <p>Next day I catch 6  .</p> <p>How many  did I catch in all? <u>18</u></p>	<u>$12 + 6 = 18$</u>