



































# ADDITION PROBLEMS TO 20 SHEET 3

		WORKING OUT
1)	<p>On Monday, I see 5 . On Tuesday, I see 4 . On Wednesday, I see 7 .</p> <p>How many  in total? _____</p>	
2)	<p>I buy 9 . The next day I buy 5 more .</p> <p>The following day, I buy 3  more.</p> <p>How many  did I buy? _____</p>	
3)	<p>There are 8  in a garden. 6 more  come along. Next 4 more  arrive.</p> <p>How many  are there now? _____</p>	
4)	<p>Captain has \$7. Sally has \$6.</p> <p>Tyger has \$7.</p> <p>What is the sum of their money? \$ _____</p>	
5)	<p>There are 5  in a chest.</p> <p>Sally puts 4 more  in the chest. Captain adds another 8  to the chest.</p> <p>How many  are there in the chest? _____</p>	



# ADDITION PROBLEMS TO 20 SHEET 3 ANSWERS

		WORKING OUT
1)	<p>On Monday, I see 5 . On Tuesday, I see 4 . On Wednesday, I see 7 .</p> <p>How many  in total? <u>16</u></p>	
2)	<p>I buy 9 . The next day I buy 5 more .</p> <p>The following day, I buy 3  more.</p> <p>How many  did I buy? <u>17</u></p>	
3)	<p>There are 8  in a garden. 6 more  come along. Next 4 more  arrive.</p> <p>How many  are there now? <u>18</u></p>	
4)	<p>Captain has \$7. Sally has \$6.</p> <p>Tyger has \$7.</p> <p>What is the sum of their money? <u>\$20</u></p>	
5)	<p>There are 5  in a chest.</p> <p>Sally puts 4 more  in the chest. Captain adds another 8  to the chest.</p> <p>How many  are there in the chest? <u>17</u></p>	