



































## ADDITION PROBLEMS TO 20 SHEET 3UK

		WORKING OUT
1)	<p>On Monday, I see 5 . On Tuesday, I see 4 . On Wednesday, I see 7 .</p> <p>How many  in total? _____</p>	
2)	<p>I buy 9 . The next day I buy 5 more .</p> <p>The following day, I buy 3  more.</p> <p>How many  did I buy? _____</p>	
3)	<p>There are 8  in a garden. 6 more  come along. Next 4 more  arrive.</p> <p>How many  are there now? _____</p>	
4)	<p>Captain has £7. Sally has £6.</p> <p>Tyger has £7.</p> <p>What is the sum of their money? £ _____</p>	
5)	<p>There are 5  in a chest.</p> <p>Sally puts 4 more  in the chest. Captain adds another 8  to the chest.</p> <p>How many  are there in the chest? _____</p>	



# ADDITION PROBLEMS TO 20 SHEET 3UK ANSWERS

		WORKING OUT
1)	<p>On Monday, I see 5 . On Tuesday, I see 4 . On Wednesday, I see 7 .</p> <p>How many  in total? <u>16</u></p>	<u><math>5 + 4 + 7 = 16</math></u>
2)	<p>I buy 9 . The next day I buy 5 more .</p> <p>The following day, I buy 3  more.</p> <p>How many  did I buy? <u>17</u></p>	<u><math>9 + 5 + 3 = 17</math></u>
3)	<p>There are 8  in a garden. 6 more  come along. Next 4 more  arrive.</p> <p>How many  are there now? <u>18</u></p>	<u><math>8 + 6 + 4 = 18</math></u>
4)	<p>Captain has £7. Sally has £6.</p> <p>Tyger has £7.</p> <p>What is the sum of their money? <u>£ 20</u></p>	<u><math>7 + 6 + 7 = 20</math></u>
5)	<p>There are 5  in a chest.</p> <p>Sally puts 4 more  in the chest. Captain adds another 8  to the chest.</p> <p>How many  are there in the chest? <u>17</u></p>	<u><math>5 + 4 + 8 = 17</math></u>