































# ADDITION & SUBTRACTION PROBLEMS TO 10 SHEET 1

		WORKING OUT
1)	<p>I have 4 .</p> <p>I buy 3  more.</p> <p>How many do I have now? _____</p>	
2)	<p>There are 5 .</p> <p>4  fly away.</p> <p>How many are left? _____</p>	
3)	<p>I have 2 .</p> <p>I buy 5  more.</p> <p>How many  in all? _____</p>	
4)	<p>Jack has 3 .</p> <p>Jill has 3 .</p> <p>How many altogether? _____</p>	
5)	<p>There are 8 .</p> <p>2  swim away.</p> <p>How many  are left? _____</p>	
6)	<p>Captain has 4 .</p> <p>Sally has 2 .</p> <p>What is the difference? _____</p>	



# ADDITION & SUBTRACTION PROBLEMS TO 10

## SHEET 1 ANSWERS

		WORKING OUT
1)	I have 4  . I buy 3  more. How many do I have now? <u>7</u>	<u><math>4 + 3 = 7</math></u>
2)	There are 5  . 4  fly away. How many are left? <u>1</u>	<u><math>5 - 4 = 1</math></u>
3)	I have 2  . I buy 5  more. How many  in all? <u>7</u>	<u><math>2 + 5 = 7</math></u>
4)	Jack has 3  . Jill has 3  . How many altogether? <u>6</u>	<u><math>3 + 3 = 6</math></u>
5)	There are 8  . 2  swim away. How many  are left? <u>6</u>	<u><math>8 - 2 = 6</math></u>
6)	Captain has 4  . Sally has 2  . What is the difference? <u>2</u>	<u><math>4 - 2 = 2</math></u>