













Name _____

Date _____













ADDITION & SUBTRACTION PROBLEMS TO 10 SHEET 2

		WORKING OUT
1)	There are 6  2 more  come along. How many  in total? _____	
2)	I have 5  I lose 3  How many  do I have left? _____	
3)	Sally has 6  Newton has 4  What is the sum? _____	
4)	I have 5  I spend 5  How many are left? _____	
5)	There are 10  2  are washed away. What is 10 minus 2? _____	



ADDITION & SUBTRACTION PROBLEMS TO 10

SHEET 2 ANSWERS

		WORKING OUT
1)	There are 6  2 more  come along. How many  in total? <u>8</u>	<u>$6 + 2 = 8$</u>
2)	I have 5  I lose 3  How many  do I have left? <u>2</u>	<u>$5 - 3 = 2$</u>
3)	Sally has 6  Newton has 4  What is the sum? <u>10</u>	<u>$6 + 4 = 10$</u>
4)	I have 5  I spend 5  How many are left? <u>0</u>	<u>$5 - 5 = 0$</u>
5)	There are 10  2  are washed away. What is 10 minus 2? <u>8</u>	<u>$10 - 2 = 8$</u>