












Name

Date














ADDITION & SUBTRACTION PROBLEMS TO 10 SHEET 3

		WORKING OUT
1)	<p>I buy 8  . I eat 4  .</p> <p>How many are left? _____</p>	
2)	<p>There are 3  .</p> <p>6 more  come along.</p> <p>How many are there in total? _____</p>	
3)	<p>There are 7  .</p> <p>3  are cut down.</p> <p>What is 7 minus 3? _____</p>	
4)	<p>Newton has 4  .</p> <p>Sally has 6  .</p> <p>What is the sum? _____</p>	
5)	<p>I have \$10. I spend \$3.</p> <p>How much do I have left? _____</p>	
6)	<p>There are 8  .</p> <p>6  fly away.</p> <p>How many  are there now? _____</p>	



ADDITION & SUBTRACTION PROBLEMS TO 10

SHEET 3 ANSWERS

		WORKING OUT
1)	I buy 8  . I eat 4  . How many are left? <u>4</u>	<u>$8 - 4 = 4$</u>
2)	There are 3  . 6 more  come along. How many are there in total? <u>9</u>	<u>$3 + 6 = 9$</u>
3)	There are 7  . 3  are cut down. What is 7 minus 3? <u>4</u>	<u>$7 - 3 = 4$</u>
4)	Newton has 4  . Sally has 6  . What is the sum? <u>10</u>	<u>$4 + 6 = 10$</u>
5)	I have \$10. I spend \$3. How much do I have left? <u>7</u>	<u>$10 - 3 = 7$</u>
6)	There are 8  . 6  fly away. How many  are there now? <u>2</u>	<u>$8 - 6 = 2$</u>