
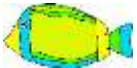










Name

Date













# ADDITION & SUBTRACTION PROBLEMS TO 15 SHEET 1

		WORKING OUT
1)	<p>I have 8 .</p> <p>I buy 4  more.</p> <p>How many do I have now? _____</p>	
2)	<p>There are 13 .</p> <p>3  fly away.</p> <p>How many are left? _____</p>	
3)	<p>Newton has 14 .</p> <p>Sally has 11 .</p> <p>What is the difference? _____</p>	
4)	<p>There are 10  in a parking lot.</p> <p>5 more  come along.</p> <p>How many are there in total? _____</p>	
5)	<p>Frazer has 6 .</p> <p>Flame has 7 .</p> <p>What is the sum? _____</p>	



# ADDITION & SUBTRACTION PROBLEMS TO 15

## SHEET 1 ANSWERS

		WORKING OUT
1)	I have 8  . I buy 4  more. How many do I have now? <u>12</u>	<u><math>8 + 4 = 12</math></u>
2)	There are 13  . 3  fly away. How many are left? <u>10</u>	<u><math>13 - 3 = 10</math></u>
3)	Newton has 14  . Sally has 11  . What is the difference? <u>3</u>	<u><math>14 - 11 = 3</math></u>
4)	There are 10  in a parking lot. 5 more  come along. How many are there in total? <u>15</u>	<u><math>10 + 5 = 15</math></u>
5)	Frazer has 6  . Flame has 7  . What is the sum? <u>13</u>	<u><math>6 + 7 = 13</math></u>