























# ADDITION & SUBTRACTION PROBLEMS TO 15 SHEET 2UK

		WORKING OUT
1)	A shop has 13  . 5  are sold. How many are left? _____	
2)	Sally has 12  . Frazer has 8  . What is the difference? _____	
3)	There are 8 blue fish  and 6 yellow fish  . What is the sum? _____	
4)	There are 14  in a parking lot. 7  drive away. What is 14 minus 7? _____	
5)	I have £10. I get £5 more. How much money in total? £ _____	
6)	Captain eats 12  . Newton eats 9  . How many more does Captain eat? _____	



# ADDITION & SUBTRACTION PROBLEMS TO 15

## SHEET 2UK ANSWERS

		WORKING OUT
1)	A shop has 13  . 5  are sold. How many are left? <u>8</u>	<u><math>13 - 5 = 8</math></u>
2)	Sally has 12  . Frazer has 8  . What is the difference? <u>4</u>	<u><math>12 - 8 = 4</math></u>
3)	There are 8 blue fish  and 6 yellow fish  . What is the sum? <u>14</u>	<u><math>8 + 6 = 14</math></u>
4)	There are 14  in a parking lot. 7  drive away. What is 14 minus 7? <u>7</u>	<u><math>14 - 7 = 7</math></u>
5)	I have £10. I get £5 more. How much money in total? <u>£15</u>	<u><math>10 + 5 = 15</math></u>
6)	Captain eats 12  . Newton eats 9  . How many more does Captain eat? <u>3</u>	<u><math>12 - 9 = 3</math></u> or <u><math>9 + 3 = 12</math></u>