



























# ADDITION & SUBTRACTION PROBLEMS TO 15 SHEET 3

		WORKING OUT
1)	<p>There are 13 .</p> <p>6  fly away.</p> <p>How many are left? _____</p>	
2)	<p>A shop sells 5  on Monday.</p> <p>It sells 3  on Tuesday and 4  on Wednesday.</p> <p>How many altogether? _____</p>	
3)	<p>There are 15 .</p> <p>8  are cut down.</p> <p>How many are left? _____</p>	
4)	<p>There are 11 .</p> <p>4 more  come along.</p> <p>How many are there in total? _____</p>	
5)	<p>Captain has 6 .</p> <p>Newton has 3 .</p> <p>Sally has 5 .</p> <p>What is the sum? _____</p>	



# ADDITION & SUBTRACTION PROBLEMS TO 15

## SHEET 3 ANSWERS

		WORKING OUT
1)	There are 13  . 6  fly away. How many are left? <u>7</u>	<u><math>13 - 6 = 7</math></u>
2)	A shop sells 5  on Monday. It sells 3  on Tuesday and 4  on Wednesday. How many altogether? <u>12</u>	<u><math>5 + 3 + 4 = 12</math></u>
3)	There are 15  . 8  are cut down. How many are left? <u>7</u>	<u><math>15 - 8 = 7</math></u>
4)	There are 11  . 4 more  come along. How many are there in total? <u>15</u>	<u><math>11 + 4 = 15</math></u>
5)	Captain has 6  . Newton has 3  . Sally has 5  . What is the sum? <u>15</u>	<u><math>6 + 3 + 5 = 14</math></u>