

























ADDITION & SUBTRACTION PROBLEMS TO 20 SHEET 1

		WORKING OUT
1)	<p>A shop has 18 .</p> <p>5  are sold.</p> <p>How many are left? _____</p>	
2)	<p>There are 12  in an airport.</p> <p>6 more  land.</p> <p>How many in total? _____</p>	
3)	<p>Captain makes 17 .</p> <p>16  are washed away.</p> <p>What is 17 minus 16? _____</p>	
4)	<p>There are 12 .</p> <p>7 more  come along.</p> <p>How many  altogether? _____</p>	
5)	<p>Bill buys 17 .</p> <p>Bert buys 10 .</p> <p>What is the difference? _____</p>	



ADDITION & SUBTRACTION PROBLEMS TO 20

SHEET 1 ANSWERS

		WORKING OUT
1)	A shop has 18  . 5  are sold. How many are left? _____	<u>$18 - 5 = 3$</u>
2)	There are 12  in an airport. 6 more  land. How many in total? _____	<u>$12 + 6 = 18$</u>
3)	Captain makes 17  . 16  are washed away. What is 17 minus 16? _____	<u>$17 - 16 = 1$</u>
4)	There are 12  . 7 more  come along. How many  altogether? _____	<u>$12 + 7 = 19$</u>
5)	Bill buys 17  . Bert buys 10  . What is the difference? _____	<u>$17 - 10 = 7$</u>